
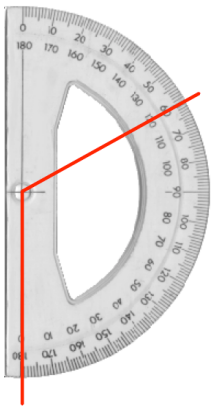

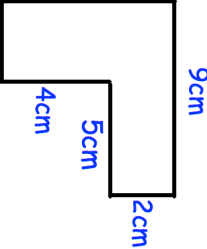


Name: \_\_\_\_\_

5-a-day


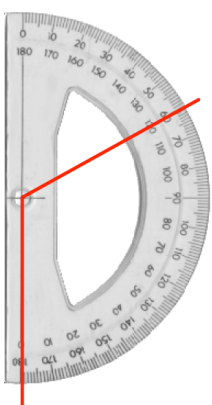

Numeracy

<b>8th June</b>	Corbettmaths 
A ticket for a concert costs £15 each.  What is the cost of 30 tickets?	
Sophie has been asked to draw a 60 degree angle. Explain her mistake.	
At a football match there are 2942 Rovers fans and 9381 City fans.  How many more fans did City have?	
Jamie sat a test. The test had 80 questions, each worth one mark. He got 20% wrong.  How many questions did Jamie get wrong?	
Calculate the perimeter of the shape above.	

Name: \_\_\_\_\_

5-a-day

Numeracy

<b>8th June</b>	Corbettmaths 
A ticket for a concert costs £15 each.  What is the cost of 30 tickets?	
Sophie has been asked to draw a 60 degree angle. Explain her mistake.	
At a football match there are 2942 Rovers fans and 9381 City fans.  How many more fans did City have?	
Jamie sat a test. The test had 80 questions, each worth one mark. He got 20% wrong.  How many questions did Jamie get wrong?	
Calculate the perimeter of the shape above.	