

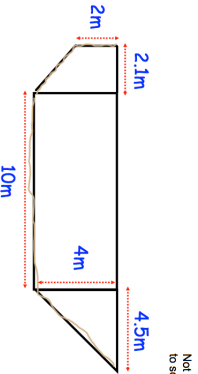


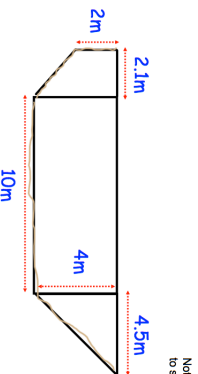


| 11th March | | Corbettmaths  |
|--|---|---|
| What is the size of each exterior angle of a regular pentagon? | What is the size of each interior angle of a regular heptagon? | |
| Write $2\frac{13}{40}$ as a decimal | | |
| $2x + 3$  | The perimeter of the rectangle is 72cm. Calculate the size of the width and length. | |
| Shown is a cross-section of a river. Calculate an estimate of the area of the cross section. |  <p style="text-align: right;"><small>Not drawn to scale</small></p> | |
| The population of a town in 1930 was 400. | | |
| Every 10 years the population of the town increases by 5%. | | |
| Work out the population in 2020. | | |

| 11th March | | Corbettmaths  |
|--|---|---|
| What is the size of each exterior angle of a regular pentagon? | What is the size of each interior angle of a regular heptagon? | |
| Write $2\frac{13}{40}$ as a decimal | | |
| $2x + 3$  | The perimeter of the rectangle is 72cm. Calculate the size of the width and length. | |
| Shown is a cross-section of a river. Calculate an estimate of the area of the cross section. |  <p style="text-align: right;"><small>Not drawn to scale</small></p> | |
| The population of a town in 1930 was 400. | | |
| Every 10 years the population of the town increases by 5%. | | |
| Work out the population in 2020. | | |