

Name: _____

5-a-day

Foundation Plus

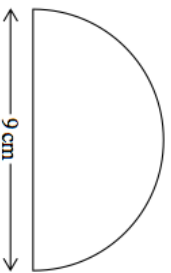
12th March

Write down an estimate for $\sqrt{51}$



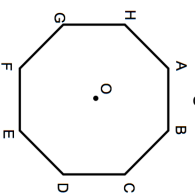
Last month James weighed 75kg
This month James weighs 78kg
Calculate the percentage increase.

Calculate the area



ABCDEFGH is a regular octagon.

Calculate the size of angle AOB.



Calculate the size of angle ABC.

Mrs Holland wants to paint her garage wall.

The wall measures $6\frac{2}{3}$ m by $3\frac{1}{7}$ m

Each can of paint covers 5m^2 .
Each can costs £7.50

How much will it cost Mrs Holland to paint her garage wall?

Name: _____

5-a-day

Foundation Plus

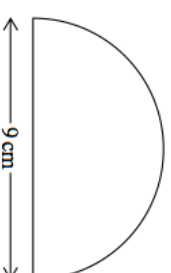
12th March

Write down an estimate for $\sqrt{51}$



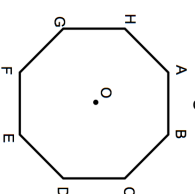
Last month James weighed 75kg
This month James weighs 78kg
Calculate the percentage increase.

Calculate the area



ABCDEFGH is a regular octagon.

Calculate the size of angle AOB.



Calculate the size of angle ABC.

Mrs Holland wants to paint her garage wall.

The wall measures $6\frac{2}{3}$ m by $3\frac{1}{7}$ m

Each can of paint covers 5m^2 .
Each can costs £7.50

How much will it cost Mrs Holland to paint her garage wall?