
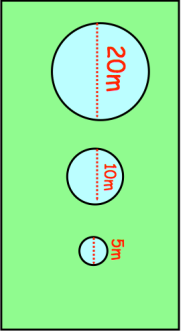

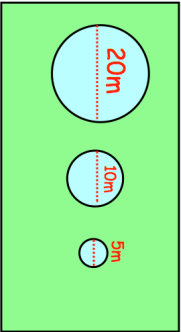


14th March		Corbettmaths 
<p>The size of an interior angle, for a regular polygon, is 178°.</p> <p>How many sides does it have?</p>		
Write 713000 in standard form	Write 4 billion in standard form.	
<p>A rectangular lawn is 100m long and 45m wide.</p> <p>There are 3 circular ponds, with radii 20m, 10m and 5m respectively.</p> <p>Mrs Jones wants to cover the lawn with grass seed.</p> <p>Each packet of grass seed covers $7m^2$ and costs £4.49</p>		How much will it cost Mrs Jones to cover the lawn with grass seed?
Find an equation of the line parallel to $y = 2x - 1$ and passing through $(0, 4)$		

14th March		Corbettmaths 
<p>The size of an interior angle, for a regular polygon, is 178°.</p> <p>How many sides does it have?</p>		
Write 713000 in standard form	Write 4 billion in standard form.	
<p>A rectangular lawn is 100m long and 45m wide.</p> <p>There are 3 circular ponds, with radii 20m, 10m and 5m respectively.</p> <p>Mrs Jones wants to cover the lawn with grass seed.</p> <p>Each packet of grass seed covers $7m^2$ and costs £4.49</p>		How much will it cost Mrs Jones to cover the lawn with grass seed?
Find an equation of the line parallel to $y = 2x - 1$ and passing through $(0, 4)$		