

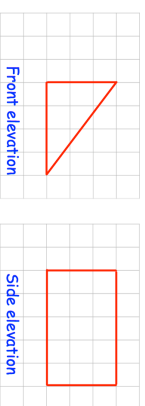
Name: _____

5-a-day


Foundation Plus



16th March



On the grid, draw the plan view.

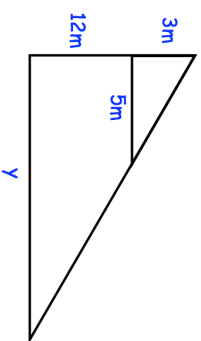


Draw a sketch of the solid shape.

Factorise

$$x^2 - 10x + 25$$

Find y



Solve the simultaneous equations

$$\begin{aligned} 2x + 4y &= 24 \\ 6x - 5y &= 21 \end{aligned}$$

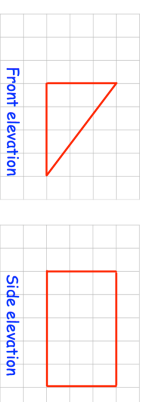
Name: _____

5-a-day


Foundation Plus



16th March



On the grid, draw the plan view.

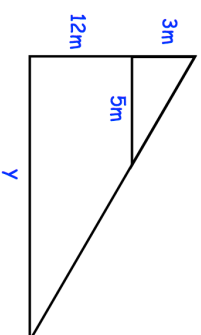


Draw a sketch of the solid shape.

Factorise

$$x^2 - 10x + 25$$

Find y



Solve the simultaneous equations

$$\begin{aligned} 2x + 4y &= 24 \\ 6x - 5y &= 21 \end{aligned}$$