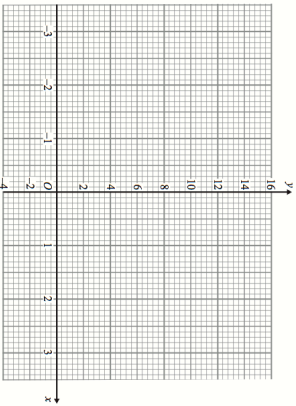
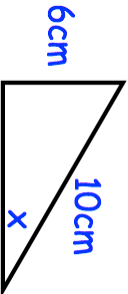
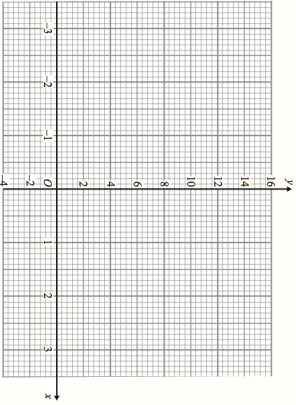
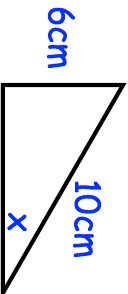


18th March		Corbettmaths																
Find the size of each interior angle of a regular nonagon (9 sides)																		
Complete the table of values for $y = x^2 + 2x + 1$																		
<table border="1"> <thead> <tr> <th>x</th> <th>-3</th> <th>-2</th> <th>-1</th> <th>0</th> <th>1</th> <th>2</th> <th>3</th> </tr> </thead> <tbody> <tr> <td>y</td> <td></td> <td></td> <td></td> <td></td> <td></td> <td></td> <td></td> </tr> </tbody> </table>	x	-3	-2	-1	0	1	2	3	y									
x	-3	-2	-1	0	1	2	3											
y																		
On the grid, draw the graph of $y = x^2 + 2x + 1$ for the values of x from -3 to 3.																		
Solve $x^2 + 5x - 50 = 0$																		
 <p>Shown is a right angled triangle.</p>	Find the size of Cos x																	

18th March		Corbettmaths																
Find the size of each interior angle of a regular nonagon (9 sides)																		
Complete the table of values for $y = x^2 + 2x + 1$																		
<table border="1"> <thead> <tr> <th>x</th> <th>-3</th> <th>-2</th> <th>-1</th> <th>0</th> <th>1</th> <th>2</th> <th>3</th> </tr> </thead> <tbody> <tr> <td>y</td> <td></td> <td></td> <td></td> <td></td> <td></td> <td></td> <td></td> </tr> </tbody> </table>	x	-3	-2	-1	0	1	2	3	y									
x	-3	-2	-1	0	1	2	3											
y																		
On the grid, draw the graph of $y = x^2 + 2x + 1$ for the values of x from -3 to 3.																		
Solve $x^2 + 5x - 50 = 0$																		
 <p>Shown is a right angled triangle.</p>	Find the size of Cos x																	