

Name: _____

5-a-day

Foundation Plus

27th March



Factorise $x^2 - 14x + 48$

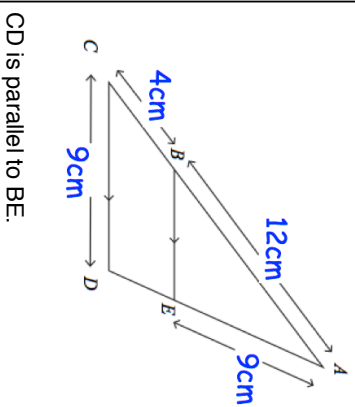
--	--

Work out the size of each interior angle of a regular decagon

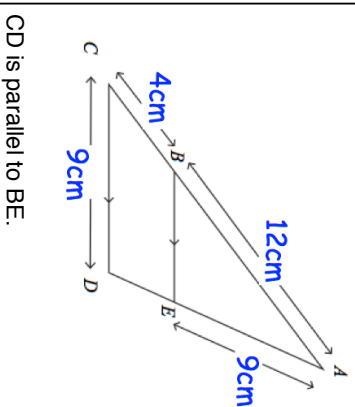
--	--

A line has equation $y = \frac{1}{2}x - 3$

Write down the gradient of the line	Write down the y-intercept of the line
-------------------------------------	----------------------------------------



Find the length of DE.	
Find the length of BE.	



Find the length of DE.	
Find the length of BE.	

Name: _____

5-a-day

Foundation Plus

27th March



Factorise $x^2 - 14x + 48$

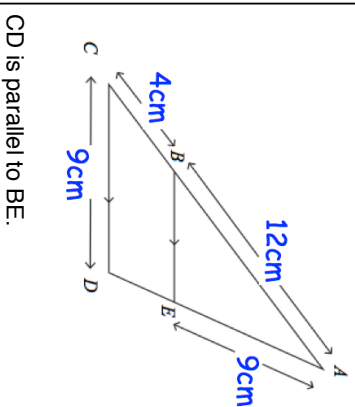
--	--

Work out the size of each interior angle of a regular decagon

--	--

A line has equation $y = \frac{1}{2}x - 3$

Write down the gradient of the line	Write down the y-intercept of the line
-------------------------------------	----------------------------------------



Find the length of DE.	
Find the length of BE.	