
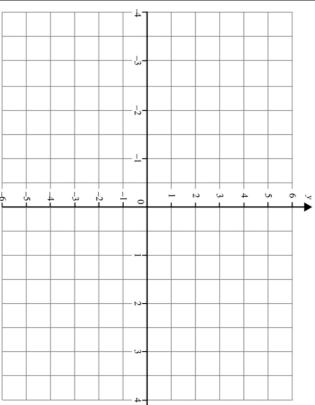

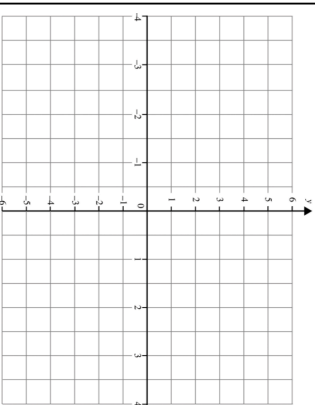


| | | | | | | | | | | | | | | | |
|---|--|----|----|----|----|---|---|---|---|----|--|---|---|---|--|
| 28th March | Corbettmaths  | | | | | | | | | | | | | | |
| <p>Anna, Beth and Carla share money in the ratio 2:3:5.</p> <p>Carla receives £75.</p> <p>How much does Beth receive?</p> | | | | | | | | | | | | | | | |
| <p>Simplify</p> $\frac{7^2 \times 7^3}{7}$ | | | | | | | | | | | | | | | |
| <p>Find the midpoint of (-2, 2) and (4, 9)</p> <p>X (4, 9)</p> <p>X (-2, 2)</p> | | | | | | | | | | | | | | | |
|  | <p>Complete the table for the graph</p> $y = 4 - x^2$ <table border="1" data-bbox="504 573 560 981"> <tr> <td>x</td> <td>-3</td> <td>-2</td> <td>-1</td> <td>0</td> <td>1</td> <td>2</td> </tr> <tr> <td>y</td> <td>-5</td> <td></td> <td>3</td> <td>4</td> <td>3</td> <td></td> </tr> </table> <p>Draw the graph on the grid.</p> | x | -3 | -2 | -1 | 0 | 1 | 2 | y | -5 | | 3 | 4 | 3 | |
| x | -3 | -2 | -1 | 0 | 1 | 2 | | | | | | | | | |
| y | -5 | | 3 | 4 | 3 | | | | | | | | | | |

| | | | | | | | | | | | | | | | |
|---|--|----|----|----|----|---|---|---|---|----|--|---|---|---|--|
| 28th March | Corbettmaths  | | | | | | | | | | | | | | |
| <p>Anna, Beth and Carla share money in the ratio 2:3:5.</p> <p>Carla receives £75.</p> <p>How much does Beth receive?</p> | | | | | | | | | | | | | | | |
| <p>Simplify</p> $\frac{7^2 \times 7^3}{7}$ | | | | | | | | | | | | | | | |
| <p>Find the midpoint of (-2, 2) and (4, 9)</p> <p>X (4, 9)</p> <p>X (-2, 2)</p> | | | | | | | | | | | | | | | |
|  | <p>Complete the table for the graph</p> $y = 4 - x^2$ <table border="1" data-bbox="504 1664 560 2072"> <tr> <td>x</td> <td>-3</td> <td>-2</td> <td>-1</td> <td>0</td> <td>1</td> <td>2</td> </tr> <tr> <td>y</td> <td>-5</td> <td></td> <td>3</td> <td>4</td> <td>3</td> <td></td> </tr> </table> <p>Draw the graph on the grid.</p> | x | -3 | -2 | -1 | 0 | 1 | 2 | y | -5 | | 3 | 4 | 3 | |
| x | -3 | -2 | -1 | 0 | 1 | 2 | | | | | | | | | |
| y | -5 | | 3 | 4 | 3 | | | | | | | | | | |