

Name: _____

5-a-day

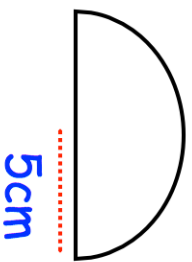
Foundation Plus

4th March



$$3\frac{1}{4} - 1\frac{2}{5}$$

Calculate the area of this semi-circle.

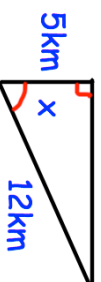


Make w the subject of

$$a = 4w - 3$$

Find the gradient of the line passing through the points (1, 6) and (3, 15).

Find the size of the angle labelled x



Name: _____

5-a-day

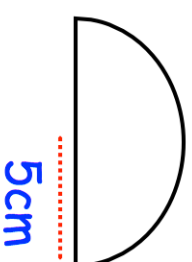
Foundation Plus

4th March



$$3\frac{1}{4} - 1\frac{2}{5}$$

Calculate the area of this semi-circle.



Make w the subject of

$$a = 4w - 3$$

Find the gradient of the line passing through the points (1, 6) and (3, 15).

Find the size of the angle labelled x

