





<b>7th March</b> 															
Work out $4\frac{1}{3} - 3\frac{4}{9}$ Give your answer as a fraction.															
c = 50 when rounded to the nearest ten. Write an inequality to show the interval in which the actual value for c lies.															
$y = \frac{1}{x}$ Complete the table of values and draw a graph															
<table border="1"> <tr> <td>x</td> <td>0.5</td> <td>1</td> <td>2</td> <td>3</td> <td>4</td> <td>5</td> </tr> <tr> <td>y</td> <td></td> <td></td> <td></td> <td></td> <td></td> <td></td> </tr> </table>	x	0.5	1	2	3	4	5	y							
x	0.5	1	2	3	4	5									
y															
Evaluate $2^{-3}$															

<b>7th March</b> 															
Work out $4\frac{1}{3} - 3\frac{4}{9}$ Give your answer as a fraction.															
c = 50 when rounded to the nearest ten. Write an inequality to show the interval in which the actual value for c lies.															
$y = \frac{1}{x}$ Complete the table of values and draw a graph															
<table border="1"> <tr> <td>x</td> <td>0.5</td> <td>1</td> <td>2</td> <td>3</td> <td>4</td> <td>5</td> </tr> <tr> <td>y</td> <td></td> <td></td> <td></td> <td></td> <td></td> <td></td> </tr> </table>	x	0.5	1	2	3	4	5	y							
x	0.5	1	2	3	4	5									
y															
Evaluate $2^{-3}$															