

Name: _____

5-a-day

Foundation



10th March

Write 14% as a decimal

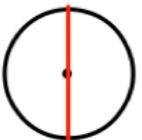
Write 24% as a fraction

Corbettmaths

Name the part of the circle shown



Name the part of the circle shown



The total pay in pounds for a salesman is:

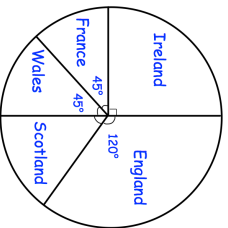
a) How much does the salesman get for each ticket sold?

Total pay = Basic wage + tickets sold \times 3

b) If the basic wage is £120 and he sells 35 tickets, what is the total pay?

600 fans were asked which team they support.

How many support England?



$I = PRT$

Find the value of I when $P = 20$,
 $R = 8$ and $T = 0.5$

Name: _____

5-a-day

Foundation



10th March

Write 14% as a decimal

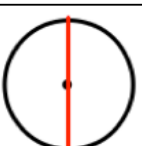
Write 24% as a fraction

Corbettmaths

Name the part of the circle shown



Name the part of the circle shown



The total pay in pounds for a salesman is:

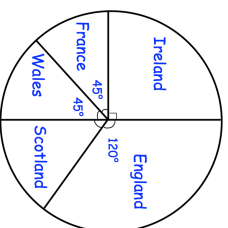
a) How much does the salesman get for each ticket sold?

Total pay = Basic wage + tickets sold \times 3

b) If the basic wage is £120 and he sells 35 tickets, what is the total pay?

600 fans were asked which team they support.

How many support England?



$I = PRT$

Find the value of I when $P = 20$,
 $R = 8$ and $T = 0.5$