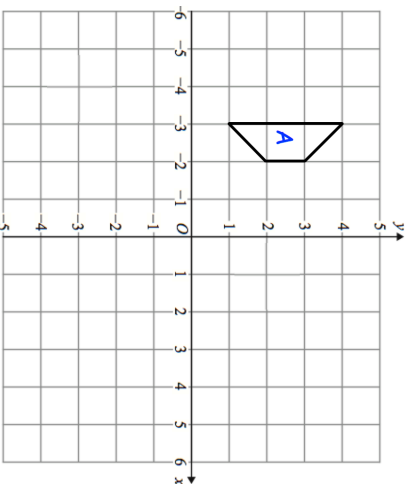


**16th March**

The first four terms in a sequence are

2 5 8 11

If the 19th term in the sequence is 56. What is the 23rd?

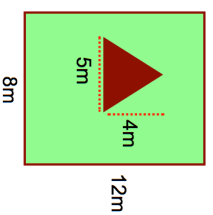


Rotate trapezium A 90° anti-clockwise about the origin.

Number of cats	Number of children
0	6
1	13
2	7
3	3
4	1

Calculate the mean number of cats owned per child.

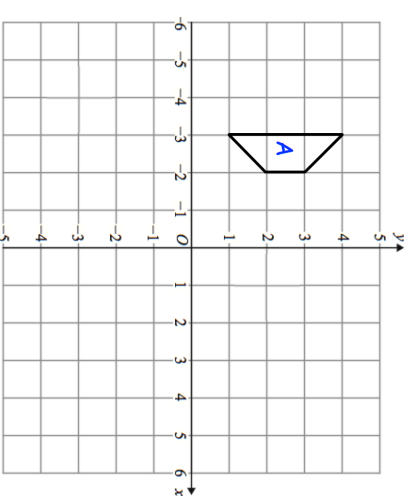
Calculate the area of the garden that is grass.

**16th March**

The first four terms in a sequence are

2 5 8 11

If the 19th term in the sequence is 56. What is the 23rd?



Rotate trapezium A 90° anti-clockwise about the origin.

Number of cats	Number of children
0	6
1	13
2	7
3	3
4	1

Calculate the mean number of cats owned per child.

Calculate the area of the garden that is grass.

