

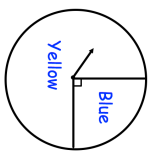
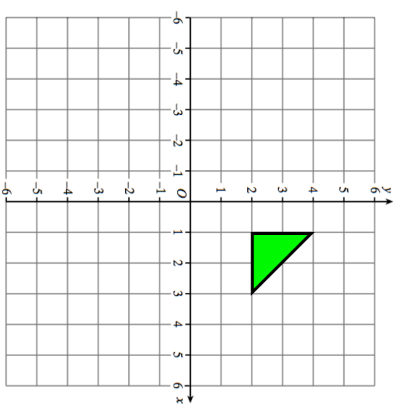
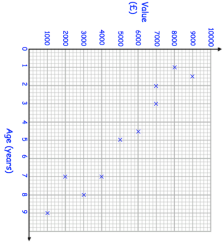


Name: \_\_\_\_\_

5-a-day



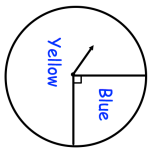
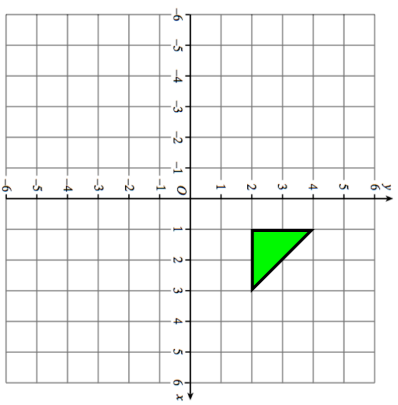
Foundation

<p><b>17th March</b></p> <p>Corbettmaths</p> 	<p>Mark the scale with the probability of landing on yellow.</p> 
<p>Shown is a fair spinner</p> 	
<p>Reflect the green triangle in the x-axis</p> 	<p>Reflect the green triangle in the line <math>x = 1</math></p>
<p>There are 8 bags of sweets. 5 bags each have 18 sweets. The other 3 bags have an equal number of sweets. Altogether there are 150 sweets</p>	<p>How many sweets are there in the other 3 bags?</p>
	<p>What type of correlation is shown?</p> 

Name: \_\_\_\_\_

5-a-day

Foundation

<p><b>17th March</b></p> <p>Corbettmaths</p> 	<p>Mark the scale with the probability of landing on yellow.</p> 
<p>Shown is a fair spinner</p> 	
<p>Reflect the green triangle in the x-axis</p> 	<p>Reflect the green triangle in the line <math>x = 1</math></p>
<p>There are 8 bags of sweets. 5 bags each have 18 sweets. The other 3 bags have an equal number of sweets. Altogether there are 150 sweets</p>	<p>How many sweets are there in the other 3 bags?</p>
	<p>What type of correlation is shown?</p> 