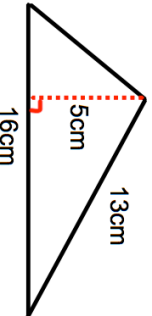
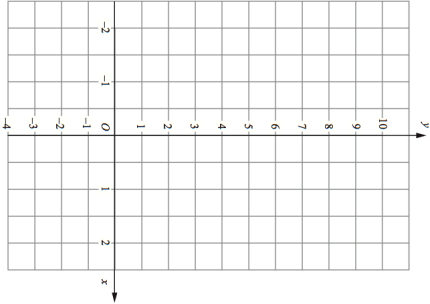
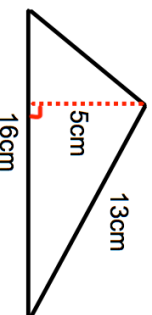
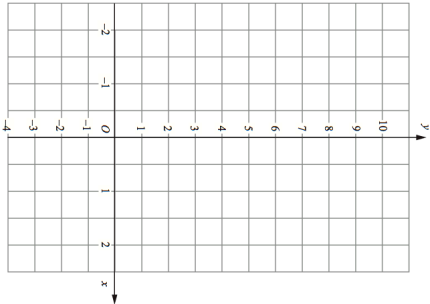


<p>21st March</p> 	<p>Find the area</p> <p style="text-align: right;">Corbettmaths</p>										
<p>Express 50p as a fraction of £4</p> <p>Give your answer in its simplest form.</p>											
<p>Complete the table of values for $y = 4x + 1$</p> <table border="1" data-bbox="726 145 813 548"> <tr> <td>x</td> <td>-1</td> <td>0</td> <td>1</td> <td>2</td> </tr> <tr> <td>y</td> <td></td> <td></td> <td></td> <td></td> </tr> </table>	x	-1	0	1	2	y					
x	-1	0	1	2							
y											
<p>Draw the graph of $y = 4x + 1$.</p>											
<p>Snacks can be bought in</p> <p>a pack of 8 biscuits for £1.92</p> <p>a pack of 10 biscuits for £2.55</p> <p>Which of these two packs is better value for money?</p>											

<p>21st March</p> 	<p>Find the area</p> <p style="text-align: right;">Corbettmaths</p>										
<p>Express 50p as a fraction of £4</p> <p>Give your answer in its simplest form.</p>											
<p>Complete the table of values for $y = 4x + 1$</p> <table border="1" data-bbox="726 1234 813 1637"> <tr> <td>x</td> <td>-1</td> <td>0</td> <td>1</td> <td>2</td> </tr> <tr> <td>y</td> <td></td> <td></td> <td></td> <td></td> </tr> </table>	x	-1	0	1	2	y					
x	-1	0	1	2							
y											
<p>Draw the graph of $y = 4x + 1$.</p>											
<p>Snacks can be bought in</p> <p>a pack of 8 biscuits for £1.92</p> <p>a pack of 10 biscuits for £2.55</p> <p>Which of these two packs is better value for money?</p>											