
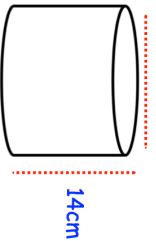

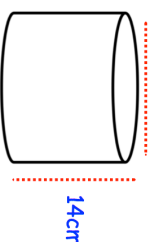


22nd March	 Corbettmaths																
In a school of 300 children. 120 are boys. What fraction are girls?	Simplify your answer																
Simplify $9w - 2w$	Simplify $8h + 5k + 4h - 3k$																
<p style="text-align: center;">Shortbread Serves 8</p> <table style="width: 100%; border-collapse: collapse;"> <tr> <td style="width: 50%;">Butter</td> <td style="width: 50%; text-align: right;">150g</td> </tr> <tr> <td>Caster Sugar</td> <td style="text-align: right;">75g</td> </tr> <tr> <td>Plain Flour</td> <td style="text-align: right;">175g</td> </tr> <tr> <td>Cornflour</td> <td style="text-align: right;">50g</td> </tr> </table> How much of each ingredient will he need for 24 people?	Butter	150g	Caster Sugar	75g	Plain Flour	175g	Cornflour	50g	<table style="width: 100%; border-collapse: collapse;"> <tr> <td style="width: 50%;">Butter:</td> <td style="width: 50%; text-align: right;">g</td> </tr> <tr> <td>Caster Sugar:</td> <td style="text-align: right;">g</td> </tr> <tr> <td>Plain Flour:</td> <td style="text-align: right;">g</td> </tr> <tr> <td>Cornflour:</td> <td style="text-align: right;">g</td> </tr> </table>	Butter:	g	Caster Sugar:	g	Plain Flour:	g	Cornflour:	g
Butter	150g																
Caster Sugar	75g																
Plain Flour	175g																
Cornflour	50g																
Butter:	g																
Caster Sugar:	g																
Plain Flour:	g																
Cornflour:	g																
<table style="width: 100%; border-collapse: collapse;"> <tr> <td style="width: 20%; text-align: center;"><input type="text" value="8"/></td> <td style="width: 20%; text-align: center;"><input type="text" value="5"/></td> <td style="width: 20%; text-align: center;"><input type="text" value="7"/></td> <td style="width: 20%; text-align: center;"><input type="text" value="4"/></td> <td style="width: 20%; text-align: center;"><input type="text" value="?"/></td> </tr> </table> Shown above are five numbers. The mean of the numbers is 9.	<input type="text" value="8"/>	<input type="text" value="5"/>	<input type="text" value="7"/>	<input type="text" value="4"/>	<input type="text" value="?"/>	Find the missing number											
<input type="text" value="8"/>	<input type="text" value="5"/>	<input type="text" value="7"/>	<input type="text" value="4"/>	<input type="text" value="?"/>													
	Find the volume of the cylinder.																

22nd March	 Corbettmaths																
In a school of 300 children. 120 are boys. What fraction are girls?	Simplify your answer																
Simplify $9w - 2w$	Simplify $8h + 5k + 4h - 3k$																
<p style="text-align: center;">Shortbread Serves 8</p> <table style="width: 100%; border-collapse: collapse;"> <tr> <td style="width: 50%;">Butter</td> <td style="width: 50%; text-align: right;">150g</td> </tr> <tr> <td>Caster Sugar</td> <td style="text-align: right;">75g</td> </tr> <tr> <td>Plain Flour</td> <td style="text-align: right;">175g</td> </tr> <tr> <td>Cornflour</td> <td style="text-align: right;">50g</td> </tr> </table> How much of each ingredient will he need for 24 people?	Butter	150g	Caster Sugar	75g	Plain Flour	175g	Cornflour	50g	<table style="width: 100%; border-collapse: collapse;"> <tr> <td style="width: 50%;">Butter:</td> <td style="width: 50%; text-align: right;">g</td> </tr> <tr> <td>Caster Sugar:</td> <td style="text-align: right;">g</td> </tr> <tr> <td>Plain Flour:</td> <td style="text-align: right;">g</td> </tr> <tr> <td>Cornflour:</td> <td style="text-align: right;">g</td> </tr> </table>	Butter:	g	Caster Sugar:	g	Plain Flour:	g	Cornflour:	g
Butter	150g																
Caster Sugar	75g																
Plain Flour	175g																
Cornflour	50g																
Butter:	g																
Caster Sugar:	g																
Plain Flour:	g																
Cornflour:	g																
<table style="width: 100%; border-collapse: collapse;"> <tr> <td style="width: 20%; text-align: center;"><input type="text" value="8"/></td> <td style="width: 20%; text-align: center;"><input type="text" value="5"/></td> <td style="width: 20%; text-align: center;"><input type="text" value="7"/></td> <td style="width: 20%; text-align: center;"><input type="text" value="4"/></td> <td style="width: 20%; text-align: center;"><input type="text" value="?"/></td> </tr> </table> Shown above are five numbers. The mean of the numbers is 9.	<input type="text" value="8"/>	<input type="text" value="5"/>	<input type="text" value="7"/>	<input type="text" value="4"/>	<input type="text" value="?"/>	Find the missing number											
<input type="text" value="8"/>	<input type="text" value="5"/>	<input type="text" value="7"/>	<input type="text" value="4"/>	<input type="text" value="?"/>													
	Find the volume of the cylinder.																