
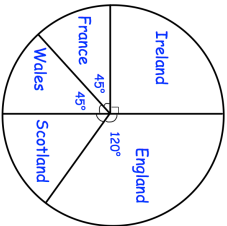
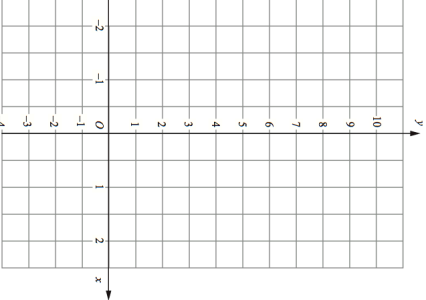

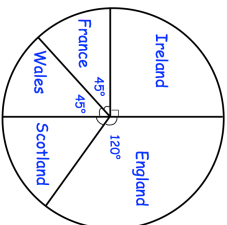
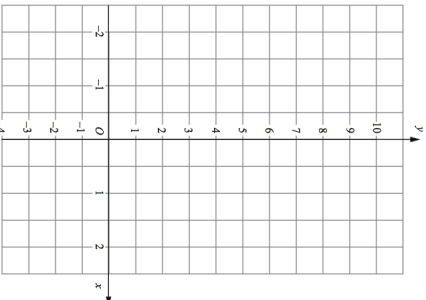


<b>25th March</b>	 Corbettmaths										
If 2nd March is a Monday What day of the week will be 1st April?	What will be the date of the first Saturday in April?										
<input type="checkbox"/> <input type="checkbox"/> <input type="checkbox"/> <input type="checkbox"/> Pattern 1   Pattern 2   Pattern 3 Draw Pattern 4	How many sticks will there be in Pattern 10?  600 fans were asked which team they support. How many support France?										
											
Complete the table of values for $y = 3x + 2$ <table border="1" data-bbox="480 147 560 551"> <tr> <td>x</td> <td>-1</td> <td>0</td> <td>1</td> <td>2</td> </tr> <tr> <td>y</td> <td></td> <td></td> <td></td> <td></td> </tr> </table>	x	-1	0	1	2	y					
x	-1	0	1	2							
y											
Draw the graph of $y = 3x + 2$											

<b>25th March</b>	 Corbettmaths										
If 2nd March is a Monday What day of the week will be 1st April?	What will be the date of the first Saturday in April?										
<input type="checkbox"/> <input type="checkbox"/> <input type="checkbox"/> <input type="checkbox"/> Pattern 1   Pattern 2   Pattern 3 Draw Pattern 4	How many sticks will there be in Pattern 10?  600 fans were asked which team they support. How many support France?										
											
Complete the table of values for $y = 3x + 2$ <table border="1" data-bbox="480 1236 560 1639"> <tr> <td>x</td> <td>-1</td> <td>0</td> <td>1</td> <td>2</td> </tr> <tr> <td>y</td> <td></td> <td></td> <td></td> <td></td> </tr> </table>	x	-1	0	1	2	y					
x	-1	0	1	2							
y											
Draw the graph of $y = 3x + 2$											