

Name: \_\_\_\_\_

5-a-day

Foundation



27th March

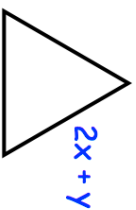
A piece of wire 68cm long is cut into eight equal pieces. What is the length of each piece?

Corbettmaths

A doctor has to see 51 patients. He can see 6 patients per hour, how many hours will it take him?

Choose a prime number between 50 and 100. Divide it by seven.

What is the remainder?

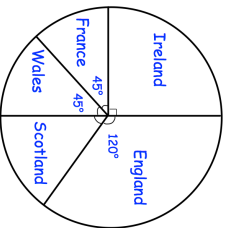


Shown is an equilateral triangle.

Find an expression for the perimeter of the triangle.

1200 fans were asked which team they support.

How many support Scotland?



Name: \_\_\_\_\_

5-a-day

Foundation



27th March

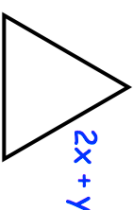
A piece of wire 68cm long is cut into eight equal pieces. What is the length of each piece?

Corbettmaths

A doctor has to see 51 patients. He can see 6 patients per hour, how many hours will it take him?

Choose a prime number between 50 and 100. Divide it by seven.

What is the remainder?



Shown is an equilateral triangle.

Find an expression for the perimeter of the triangle.

1200 fans were asked which team they support.

How many support Scotland?

