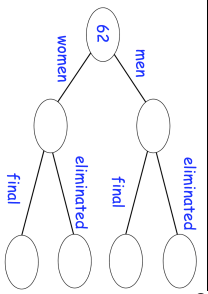



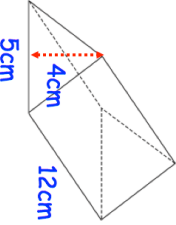
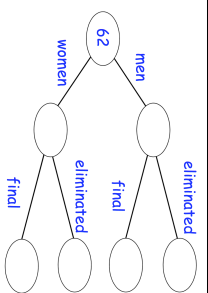



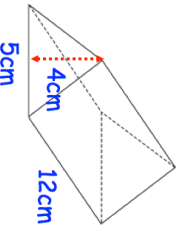


<p>3rd March</p> <p>62 people took part in a talent show 43 of the people were women. 10 people made it through to the final and the rest were eliminated. 3 men made it through to the final. Complete the frequency tree</p>											
<p>Miss Jones gives her class a test. The test is out of 40 marks.</p> <p>Here are their scores.</p> <table border="0"> <tr> <td>31</td> <td>29</td> <td>20</td> <td>35</td> <td>32</td> </tr> <tr> <td>38</td> <td>32</td> <td></td> <td></td> <td></td> </tr> </table>	31	29	20	35	32	38	32				<p>The pass mark is 75%</p> <p>How many students pass?</p>
31	29	20	35	32							
38	32										
<p>$3a + 2$ $5a - 4$ $8a$</p>  <p>Write an expression for the distance from Antrim to Lisburn</p>											
<p>4 Litres  £2.20</p> <p>6 Litres  £3.24</p> <p>Cooking oil is sold in two sizes of cans.</p>	<p>Which size of can gives the better value for money?</p>										
	<p>Find the volume of the prism.</p>										

<p>3rd March</p> <p>62 people took part in a talent show 43 of the people were women. 10 people made it through to the final and the rest were eliminated. 3 men made it through to the final. Complete the frequency tree</p>											
<p>Miss Jones gives her class a test. The test is out of 40 marks.</p> <p>Here are their scores.</p> <table border="0"> <tr> <td>31</td> <td>29</td> <td>20</td> <td>35</td> <td>32</td> </tr> <tr> <td>38</td> <td>32</td> <td></td> <td></td> <td></td> </tr> </table>	31	29	20	35	32	38	32				<p>The pass mark is 75%</p> <p>How many students pass?</p>
31	29	20	35	32							
38	32										
<p>$3a + 2$ $5a - 4$ $8a$</p>  <p>Write an expression for the distance from Antrim to Lisburn</p>											
<p>4 Litres  £2.20</p> <p>6 Litres  £3.24</p> <p>Cooking oil is sold in two sizes of cans.</p>	<p>Which size of can gives the better value for money?</p>										
	<p>Find the volume of the prism.</p>										