
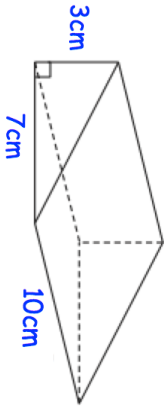

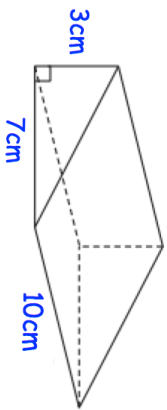


31st March	 Corbettmaths																				
Solve $3x = 24$	Expand $5(x + 4)$																				
Decrease 5400 by 12%	The angle y is drawn accurately. Find the size of the reflex angle y .																				
<table border="1" data-bbox="478 147 649 360"> <tr><td>w</td><td>w</td><td>w</td><td>w</td><td>20</td></tr> <tr><td>w</td><td>w</td><td>x</td><td>x</td><td>24</td></tr> <tr><td>w</td><td>x</td><td>x</td><td>y</td><td>25</td></tr> <tr><td>w</td><td>x</td><td>y</td><td>z</td><td>30</td></tr> </table>	w	w	w	w	20	w	w	x	x	24	w	x	x	y	25	w	x	y	z	30	In the grid, each row adds up to the number to the right. Find the values of w , x , y and z .
w	w	w	w	20																	
w	w	x	x	24																	
w	x	x	y	25																	
w	x	y	z	30																	
	Find the volume of the triangular prism.																				

31st March	 Corbettmaths																				
Solve $3x = 24$	Expand $5(x + 4)$																				
Decrease 5400 by 12%	The angle y is drawn accurately. Find the size of the reflex angle y .																				
<table border="1" data-bbox="478 1238 649 1451"> <tr><td>w</td><td>w</td><td>w</td><td>w</td><td>20</td></tr> <tr><td>w</td><td>w</td><td>x</td><td>x</td><td>24</td></tr> <tr><td>w</td><td>x</td><td>x</td><td>y</td><td>25</td></tr> <tr><td>w</td><td>x</td><td>y</td><td>z</td><td>30</td></tr> </table>	w	w	w	w	20	w	w	x	x	24	w	x	x	y	25	w	x	y	z	30	In the grid, each row adds up to the number to the right. Find the values of w , x , y and z .
w	w	w	w	20																	
w	w	x	x	24																	
w	x	x	y	25																	
w	x	y	z	30																	
	Find the volume of the triangular prism.																				