
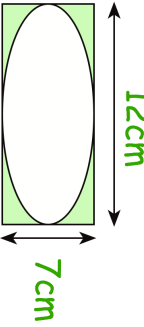
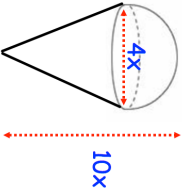

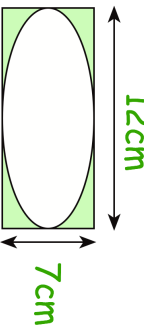
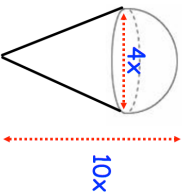


24th March Factorise completely $100x - x^3$	 Corbettmaths
n is the set of even numbers from 1 to 400 O is the set of odd numbers P is the set of prime numbers C is the set of cube numbers S is the set of square numbers	How many numbers are there in the set $O \cup P \cup C \cup S$
The area of an ellipse, width a and height b is given by $A = \frac{\pi ab}{4}$	Find the shaded area. 
	A solid is made by putting a hemisphere on top of a cone. Find an expression for the volume in terms of x.
The coefficient of the x^2 in the expansion of $(x + a)(x + 3)(2x - 3)$ is 9. Find a	

24th March Factorise completely $100x - x^3$	 Corbettmaths
n is the set of even numbers from 1 to 400 O is the set of odd numbers P is the set of prime numbers C is the set of cube numbers S is the set of square numbers	How many numbers are there in the set $O \cup P \cup C \cup S$
The area of an ellipse, width a and height b is given by $A = \frac{\pi ab}{4}$	Find the shaded area. 
	A solid is made by putting a hemisphere on top of a cone. Find an expression for the volume in terms of x.
The coefficient of the x^2 in the expansion of $(x + a)(x + 3)(2x - 3)$ is 9. Find a	