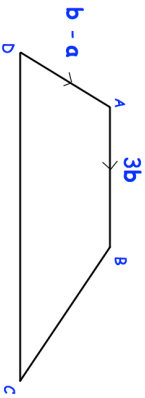
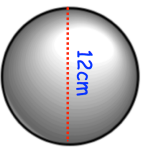
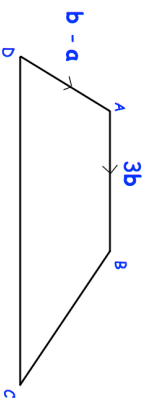
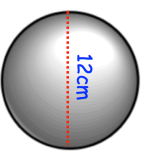


9th March	
<p>The length of the base of a triangle and its perpendicular height are:</p> <p>base: <math>\frac{x+5}{10}</math> cm</p> <p>height: <math>\frac{x-1}{4}</math> cm</p>	<p>Find an expression for the area of the triangle.</p>
<p>ABCD is a trapezium</p>  <p>AB and DC are parallel. DC = 2AB</p> <p>Write down these vectors in terms of <b>a</b> and <b>b</b></p>	<p><math>\overrightarrow{DC}</math></p> <p><math>\overrightarrow{BC}</math></p>
<p>A solid sphere has a diameter of 12cm. The sphere is made from glass. The density of the glass is 4.12g/cm</p> <p>Find the mass of the glass sphere.</p>	
<p>Prove the product of two odd numbers is always odd.</p>	

9th March	
<p>The length of the base of a triangle and its perpendicular height are:</p> <p>base: <math>\frac{x+5}{10}</math> cm</p> <p>height: <math>\frac{x-1}{4}</math> cm</p>	<p>Find an expression for the area of the triangle.</p>
<p>ABCD is a trapezium</p>  <p>AB and DC are parallel. DC = 2AB</p> <p>Write down these vectors in terms of <b>a</b> and <b>b</b></p>	<p><math>\overrightarrow{DC}</math></p> <p><math>\overrightarrow{BC}</math></p>
<p>A solid sphere has a diameter of 12cm. The sphere is made from glass. The density of the glass is 4.12g/cm</p> <p>Find the mass of the glass sphere.</p>	
<p>Prove the product of two odd numbers is always odd.</p>	