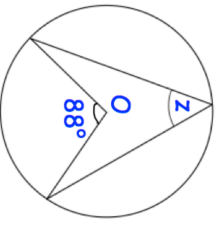



Name: \_\_\_\_\_

5-a-day

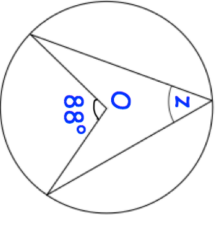
Higher

<p><b>15th March</b></p> <p style="text-align: right;">Corbettmaths</p>	
<p>Simplify <math>\sqrt{32}</math></p>	
<p>Ashley takes two cubes out of a bag, with replacement. There are 5 red, 3 blue and 2 green cubes. What is the probability he picks two red cubes?</p>	
<p>A number is increased by 10%. The answer is decreased by 10%. Is the final number smaller, the same as or larger than the starting number?</p>	<p>What is the overall percentage change?</p>
	<p>Find z</p>
<p>A biased coin is flipped three times. The probability of the coin landing on tails is 0.8 Find the probability the coin lands on heads all three times.</p>	

Name: \_\_\_\_\_

5-a-day

Higher

<p><b>15th March</b></p> <p style="text-align: right;">Corbettmaths</p>	
<p>Simplify <math>\sqrt{32}</math></p>	
<p>Ashley takes two cubes out of a bag, with replacement. There are 5 red, 3 blue and 2 green cubes. What is the probability he picks two red cubes?</p>	
<p>A number is increased by 10%. The answer is decreased by 10%. Is the final number smaller, the same as or larger than the starting number?</p>	<p>What is the overall percentage change?</p>
	<p>Find z</p>
<p>A biased coin is flipped three times. The probability of the coin landing on tails is 0.8 Find the probability the coin lands on heads all three times.</p>	