
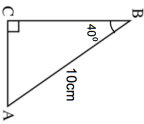

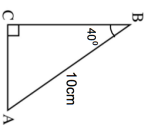


20th March	Corbettmaths 												
A particle travels for $2 \times 10^3$ seconds, at a speed of $5 \times 10^5$ m/s	How far does the particle travel, in kilometres?												
Solve $x^2 = 8x - 15$													
Work out $8\frac{4}{3}$													
 <table border="1" data-bbox="561 280 646 555"> <thead> <tr> <th>Angle</th> <th>Sine</th> <th>Cosine</th> <th>Tangent</th> </tr> </thead> <tbody> <tr> <td><math>40^\circ</math></td> <td>0.643</td> <td>0.766</td> <td>0.839</td> </tr> <tr> <td><math>50^\circ</math></td> <td>0.766</td> <td>0.643</td> <td>1.192</td> </tr> </tbody> </table>	Angle	Sine	Cosine	Tangent	$40^\circ$	0.643	0.766	0.839	$50^\circ$	0.766	0.643	1.192	Calculate the perimeter of the triangle.
Angle	Sine	Cosine	Tangent										
$40^\circ$	0.643	0.766	0.839										
$50^\circ$	0.766	0.643	1.192										
Where does the line $y - 2x = 9$ cross the x-axis?	Where does the line $y - 2x = 9$ cross the y-axis?												

20th March	Corbettmaths 												
A particle travels for $2 \times 10^3$ seconds, at a speed of $5 \times 10^5$ m/s	How far does the particle travel, in kilometres?												
Solve $x^2 = 8x - 15$													
Work out $8\frac{4}{3}$													
 <table border="1" data-bbox="561 1370 646 1646"> <thead> <tr> <th>Angle</th> <th>Sine</th> <th>Cosine</th> <th>Tangent</th> </tr> </thead> <tbody> <tr> <td><math>40^\circ</math></td> <td>0.643</td> <td>0.766</td> <td>0.839</td> </tr> <tr> <td><math>50^\circ</math></td> <td>0.766</td> <td>0.643</td> <td>1.192</td> </tr> </tbody> </table>	Angle	Sine	Cosine	Tangent	$40^\circ$	0.643	0.766	0.839	$50^\circ$	0.766	0.643	1.192	Calculate the perimeter of the triangle.
Angle	Sine	Cosine	Tangent										
$40^\circ$	0.643	0.766	0.839										
$50^\circ$	0.766	0.643	1.192										
Where does the line $y - 2x = 9$ cross the x-axis?	Where does the line $y - 2x = 9$ cross the y-axis?												