
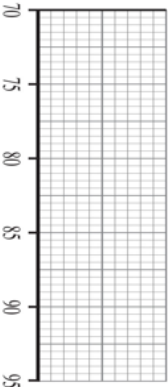
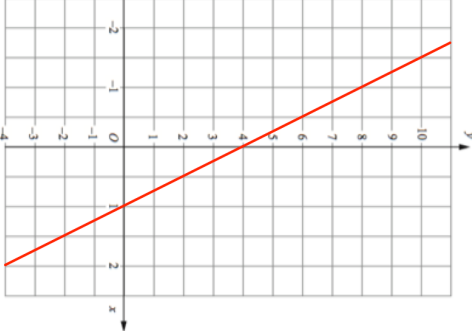


Name: \_\_\_\_\_

5-a-day


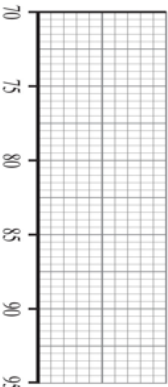
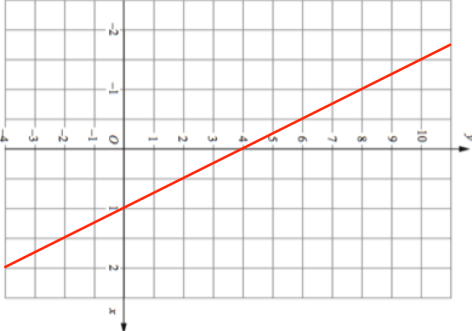
Higher

<b>27th March</b>		
	<p>The median score was 85. The lowest quartile was 78 and lowest score was 71.</p> <p>The range is 21 and interquartile range 10.</p> <p>Draw the box plot</p>	<p>Corbettmaths</p>
	<p>Line A is shown on the grid.</p> <p>Find the equation of line A</p> <p>Line B is parallel to Line A and passes through (9, 20).</p> <p>Find the equation of line B</p>	
<p>What is the value of n</p> $5^n = \frac{1}{125}$		
<p>A man walks y miles North and then (y + 8) miles west.</p> <p>He is now 12 miles from the starting point.</p>	<p>Show y satisfies <math>y^2 + 8y - 40 = 0</math></p>	

Name: \_\_\_\_\_

5-a-day

Higher

<b>27th March</b>		
	<p>The median score was 85. The lowest quartile was 78 and lowest score was 71.</p> <p>The range is 21 and interquartile range 10.</p> <p>Draw the box plot</p>	<p>Corbettmaths</p>
	<p>Line A is shown on the grid.</p> <p>Find the equation of line A</p> <p>Line B is parallel to Line A and passes through (9, 20).</p> <p>Find the equation of line B</p>	
<p>What is the value of n</p> $5^n = \frac{1}{125}$		
<p>A man walks y miles North and then (y + 8) miles west.</p> <p>He is now 12 miles from the starting point.</p>	<p>Show y satisfies <math>y^2 + 8y - 40 = 0</math></p>	