

Name: _____

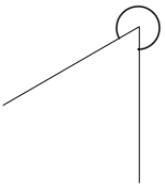
5-a-day

Numeracy

12th March




What type of angle is shown?



Calculate $\sqrt{16}$

$9704 \div 8$

Draw any lines of symmetry on the shape.



Write 20,100,000 in words.

Name: _____

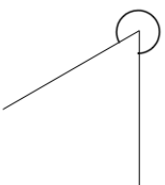
5-a-day

Numeracy

12th March




What type of angle is shown?



Calculate $\sqrt{16}$

$9704 \div 8$

Draw any lines of symmetry on the shape.



Write 20,100,000 in words.