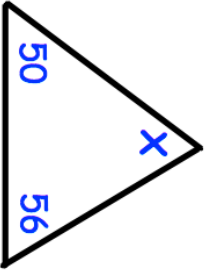

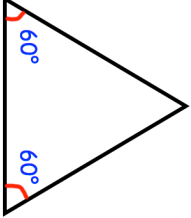
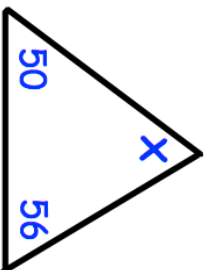

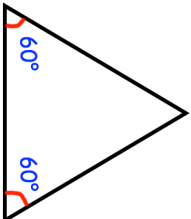


<p>13th March</p>  <p>Corbettmaths</p>	
<p>Work out 12.6 - 3.14</p>	
<p>A teacher has 153 sweets. The teacher shares the sweets equally among 9 students. How many sweets does each pupil receive?</p>	
$\begin{array}{r} \square 24 \\ - 15\square \\ \hline 6\square 9 \end{array}$	
 <p>Not drawn accurately</p>	<p>What type of triangle is shown?</p>

<p>13th March</p>  <p>Corbettmaths</p>	
<p>Work out 12.6 - 3.14</p>	
<p>A teacher has 153 sweets. The teacher shares the sweets equally among 9 students. How many sweets does each pupil receive?</p>	
$\begin{array}{r} \square 24 \\ - 15\square \\ \hline 6\square 9 \end{array}$	
 <p>Not drawn accurately</p>	<p>What type of triangle is shown?</p>