

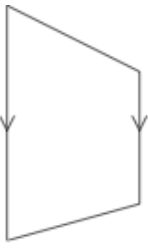
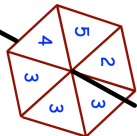


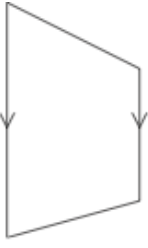
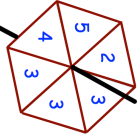


16th March		 Corbettmaths
		
Name.....	Name.....	
Write 0.3 as a fraction	Write 25% as a fraction	
$\begin{array}{r} \square 0 \square \\ - 381 \\ \hline 5 \square 1 \end{array}$		
 <p>Amir makes a fair spinner with six sectors.</p>	<div style="border: 1px solid black; padding: 5px; display: inline-block;"> Impossible Unlikely Evens Likely Certain </div> <p>Use a word from the box which best describes the probability of each of the following events</p>	
The spinner will land on 6	The spinner will land on 3	

16th March		 Corbettmaths
		
Name.....	Name.....	
Write 0.3 as a fraction	Write 25% as a fraction	
$\begin{array}{r} \square 0 \square \\ - 381 \\ \hline 5 \square 1 \end{array}$		
 <p>Amir makes a fair spinner with six sectors.</p>	<div style="border: 1px solid black; padding: 5px; display: inline-block;"> Impossible Unlikely Evens Likely Certain </div> <p>Use a word from the box which best describes the probability of each of the following events</p>	
The spinner will land on 6	The spinner will land on 3	