





18th March																				
Shown is the net for a 3D shape.																				
Name the 3D shape.																				
<table border="1"> <tr> <th>Day</th> <th>Monday</th> <th>Tuesday</th> <th>Wednesday</th> <th>Thursday</th> <th>Friday</th> </tr> <tr> <td>Temperature</td> <td>-4</td> <td>1</td> <td>-6</td> <td>1</td> <td>-2</td> </tr> </table>	Day	Monday	Tuesday	Wednesday	Thursday	Friday	Temperature	-4	1	-6	1	-2								
Day	Monday	Tuesday	Wednesday	Thursday	Friday															
Temperature	-4	1	-6	1	-2															
Which day had the lowest temperature?					What fraction of the days had a temperature below 0°C															
BBC 1 23% BBC 2 13% ITV 40% Channel 4 Channel 5 5%					A group of people watch 5 TV channels. What percentage watched Channel 4?															
Shay says "When you square an odd number, you get an even number."																				
Is Shay right?																				

18th March																				
Shown is the net for a 3D shape.																				
Name the 3D shape.																				
<table border="1"> <tr> <th>Day</th> <th>Monday</th> <th>Tuesday</th> <th>Wednesday</th> <th>Thursday</th> <th>Friday</th> </tr> <tr> <td>Temperature</td> <td>-4</td> <td>1</td> <td>-6</td> <td>1</td> <td>-2</td> </tr> </table>	Day	Monday	Tuesday	Wednesday	Thursday	Friday	Temperature	-4	1	-6	1	-2								
Day	Monday	Tuesday	Wednesday	Thursday	Friday															
Temperature	-4	1	-6	1	-2															
Which day had the lowest temperature?					What fraction of the days had a temperature below 0°C															
BBC 1 23% BBC 2 13% ITV 40% Channel 4 Channel 5 5%					A group of people watch 5 TV channels. What percentage watched Channel 4?															
Shay says "When you square an odd number, you get an even number."																				
Is Shay right?																				