

Name: _____

5-a-day

Numeracy

27th March

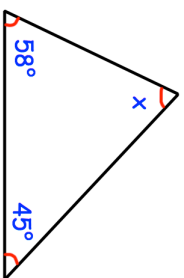
Corbettmaths



A pizza costs £7.35
Jim pays with a £10 note.

How much change should he receive?

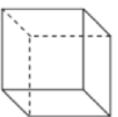
Find the size of the angle x .



Four tickets for a trip cost a total of £700.

Work out the cost of one ticket.

Draw a 155 degree angle



Shown is a cube

How many faces does a cube have?

How many edges does a cube have?

Name: _____

5-a-day

Numeracy

27th March

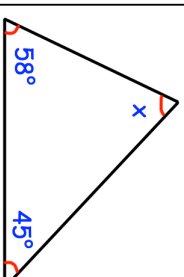
Corbettmaths



A pizza costs £7.35
Jim pays with a £10 note.

How much change should he receive?

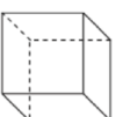
Find the size of the angle x .



Four tickets for a trip cost a total of £700.

Work out the cost of one ticket.

Draw a 155 degree angle



Shown is a cube

How many faces does a cube have?

How many edges does a cube have?