

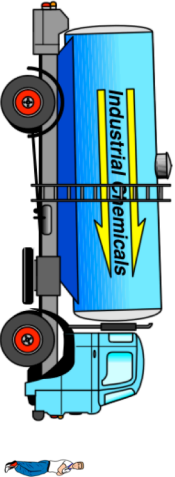


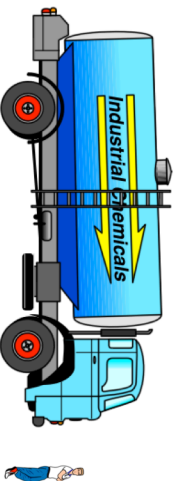


8th March	Corbettmaths 
Sketch an isosceles triangle	Sketch a right angled triangle
 <p>What fraction of this grid is shaded?</p>	
<p>Write down the largest even number you can using all four cards</p> <div style="display: flex; justify-content: space-around; align-items: center;"> <div style="border: 1px solid black; border-radius: 10px; width: 40px; height: 40px; display: flex; align-items: center; justify-content: center;">7</div> <div style="border: 1px solid black; border-radius: 10px; width: 40px; height: 40px; display: flex; align-items: center; justify-content: center;">4</div> <div style="border: 1px solid black; border-radius: 10px; width: 40px; height: 40px; display: flex; align-items: center; justify-content: center;">8</div> <div style="border: 1px solid black; border-radius: 10px; width: 40px; height: 40px; display: flex; align-items: center; justify-content: center;">1</div> </div>	
<p>The scale diagram shows a man and a lorry.</p> 	
<p>The man is 6 feet tall.</p> <p>Estimate the length of the lorry in feet.</p>	

8th March	Corbettmaths 
Sketch an isosceles triangle	Sketch a right angled triangle
 <p>What fraction of this grid is shaded?</p>	
<p>Write down the largest even number you can using all four cards</p> <div style="display: flex; justify-content: space-around; align-items: center;"> <div style="border: 1px solid black; border-radius: 10px; width: 40px; height: 40px; display: flex; align-items: center; justify-content: center;">7</div> <div style="border: 1px solid black; border-radius: 10px; width: 40px; height: 40px; display: flex; align-items: center; justify-content: center;">4</div> <div style="border: 1px solid black; border-radius: 10px; width: 40px; height: 40px; display: flex; align-items: center; justify-content: center;">8</div> <div style="border: 1px solid black; border-radius: 10px; width: 40px; height: 40px; display: flex; align-items: center; justify-content: center;">1</div> </div>	
<p>The scale diagram shows a man and a lorry.</p> 	
<p>The man is 6 feet tall.</p> <p>Estimate the length of the lorry in feet.</p>	