

Name: \_\_\_\_\_

5-a-day

Foundation Plus

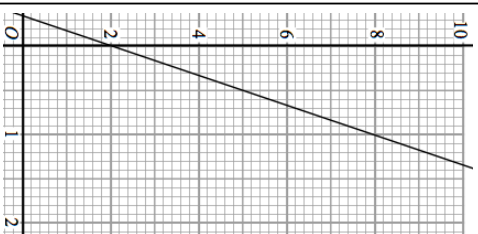
19th May

Find the LCM of 32 and 48

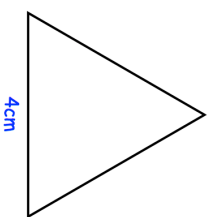


Find the HCF of 32 and 48

What is the equation of the line?



Write down the equation of a line parallel to the line shown.



Shown is an equilateral triangle of side length 4cm  
Calculate the area of the triangle.

Name: \_\_\_\_\_

5-a-day

Foundation Plus

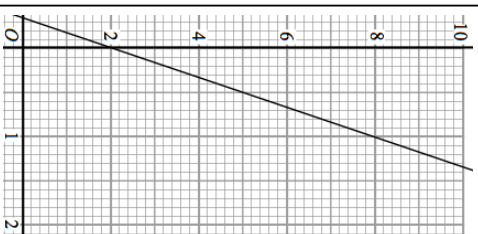
19th May

Find the LCM of 32 and 48

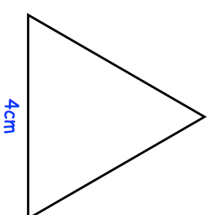


Find the HCF of 32 and 48

What is the equation of the line?



Write down the equation of a line parallel to the line shown.



Shown is an equilateral triangle of side length 4cm  
Calculate the area of the triangle.