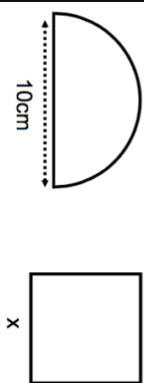
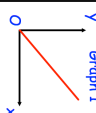
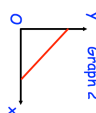
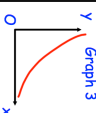
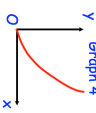
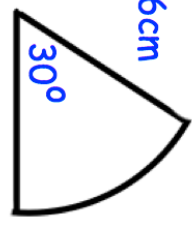
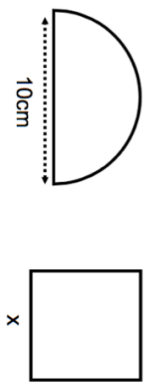
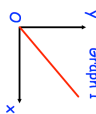
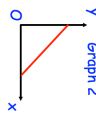
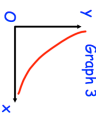
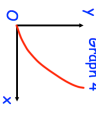
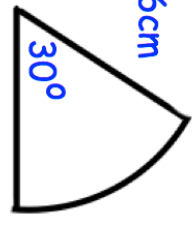


<p>25th May</p> <p>Simplify</p> $a^4 \div a^{-2}$	<p>Simplify</p> $\frac{s^3 \times s^4}{s^2}$
<p>The semi-circle and square have the same area.</p> 	<p>Find x.</p>
<p>Graph 1</p>  <p>Graph 2</p>  <p>Graph 3</p>  <p>Graph 4</p> 	<p>One of the graphs shows that y is directly proportional to x.</p> <p>Which graph?</p>
<p>A bag contains white and red beads in the ratio 5:7</p> <p>What fraction of the counters are white?</p>	
<p>6cm</p>  <p>30°</p>	<p>Calculate the area of the sector.</p>

<p>25th May</p> <p>Simplify</p> $a^4 \div a^{-2}$	<p>Simplify</p> $\frac{s^3 \times s^4}{s^2}$
<p>The semi-circle and square have the same area.</p> 	<p>Find x.</p>
<p>Graph 1</p>  <p>Graph 2</p>  <p>Graph 3</p>  <p>Graph 4</p> 	<p>One of the graphs shows that y is directly proportional to x.</p> <p>Which graph?</p>
<p>A bag contains white and red beads in the ratio 5:7</p> <p>What fraction of the counters are white?</p>	
<p>6cm</p>  <p>30°</p>	<p>Calculate the area of the sector.</p>