

Name: \_\_\_\_\_

5-a-day

Foundation

16th May

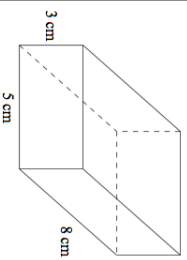


Corbettmaths

	London	New York	Beijing
High	29	30	41
Low	-3	-10	2

Which city had the largest difference between their high and low temperature?

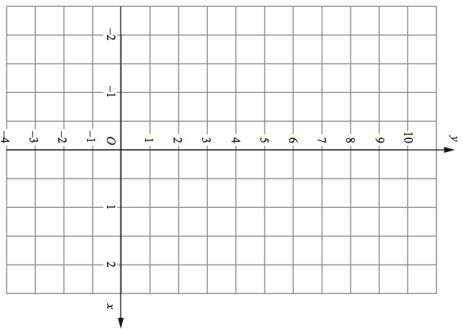
Calculate the volume



Complete the table of values for  $y = 4x + 2$

x	-1	0	1	2
y				

On the grid, draw the graph of  $y = 4x + 2$



Simplify

$$\frac{c^6}{c^4}$$

Simplify

$$(c^8)^2$$

Name: \_\_\_\_\_

5-a-day

Foundation

16th May

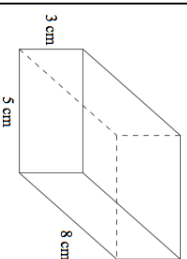


Corbettmaths

	London	New York	Beijing
High	29	30	41
Low	-3	-10	2

Which city had the largest difference between their high and low temperature?

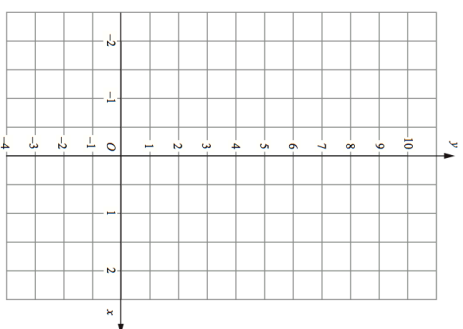
Calculate the volume



Complete the table of values for  $y = 4x + 2$

x	-1	0	1	2
y				

On the grid, draw the graph of  $y = 4x + 2$



Simplify

$$\frac{c^6}{c^4}$$

Simplify

$$(c^8)^2$$