

22nd MayWork out 0.9×1.4 Work out 0.4×0.07 

Corbettmaths

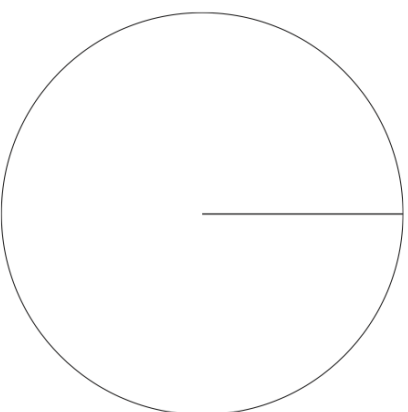
Tilly the dog barks every 9 seconds.
Billy the dog barks every 12 seconds.
They both bark at the same time.

After how many seconds will they next bark at the same time?

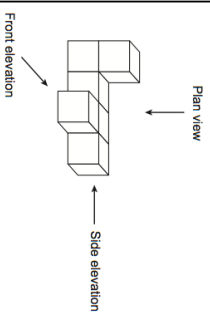

The table gives information about the dogs in a village

Breed	Frequency
Spaniel	11
Poodle	7
Greyhound	4
Jack Russell	14

Calculate the size of each angle and then draw an accurate pie chart.



Draw the side elevation

**22nd May**Work out 0.9×1.4 Work out 0.4×0.07 

Corbettmaths

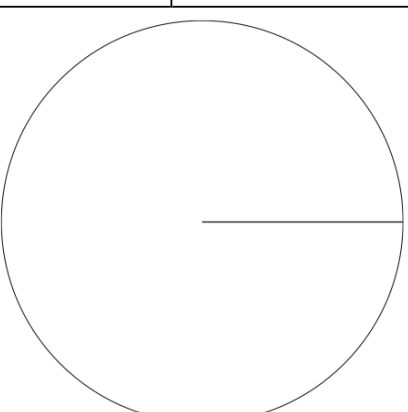
Tilly the dog barks every 9 seconds.
Billy the dog barks every 12 seconds.
They both bark at the same time.

After how many seconds will they next bark at the same time?

The table gives information about the dogs in a village

Breed	Frequency
Spaniel	11
Poodle	7
Greyhound	4
Jack Russell	14

Calculate the size of each angle and then draw an accurate pie chart.



Draw the side elevation

