

Name: _____

5-a-day

Foundation

25th May



Corbettmaths

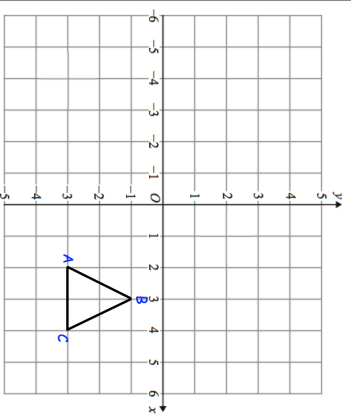
In 2014, Bristol United's average attendance was 2000
The following season, the average attendance increased by $\frac{2}{5}$.
Work out the average attendance in 2015.

In a class of 20 students, 12 are male.


What fraction of the class are male?

What percentage of the class are male?


Reflect triangle ABC using the mirror line $y = 1$



Translate triangle ABC by the vector $\begin{pmatrix} -5 \\ -2 \end{pmatrix}$



Draw the radius



Draw the diameter

Name: _____

5-a-day

Foundation

25th May



Corbettmaths

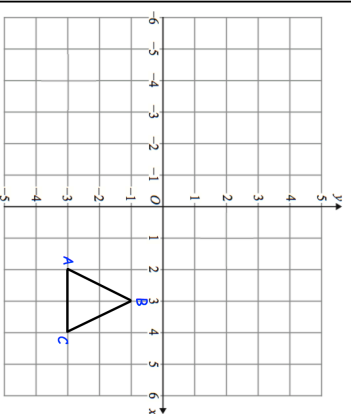
In 2014, Bristol United's average attendance was 2000
The following season, the average attendance increased by $\frac{2}{5}$.
Work out the average attendance in 2015.

In a class of 20 students, 12 are male.


What fraction of the class are male?

What percentage of the class are male?


Reflect triangle ABC using the mirror line $y = 1$



Translate triangle ABC by the vector $\begin{pmatrix} -5 \\ -2 \end{pmatrix}$



Draw the radius



Draw the diameter