

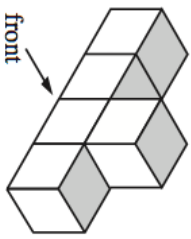
Name: _____

5-a-day

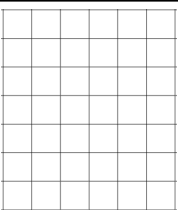
Foundation




3rd May




Draw the front view



Draw the side view



Draw the plan view



Write 60 as a product of primes, in index form.

Factorise $35w - 45y$

Alan and Beth share 65 sweets in the ratio 2:3. How many sweets does each person receive?

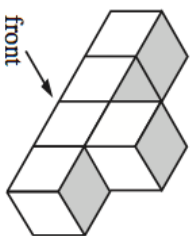
Name: _____

5-a-day

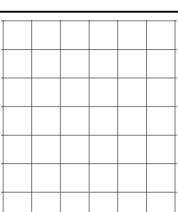
Foundation




3rd May




Draw the front view



Draw the side view



Draw the plan view



Write 60 as a product of primes, in index form.

Factorise $35w - 45y$

Alan and Beth share 65 sweets in the ratio 2:3. How many sweets does each person receive?