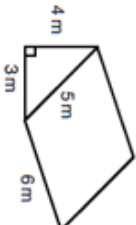


Name: _____

5-a-day

Foundation

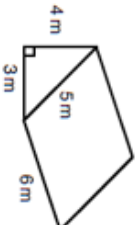
4th May	Corbettmaths
Simplify $6b - 4b$	Simplify $2b \times 3c$
A cuboid has sides length 3cm, 4cm and 5cm. What is its volume?	What is its surface area?
	
Calculate the volume	
Increase £54 by 17%	
Match each of the expressions	



Corbettmaths

Simplify
 $6b - 4b$ Simplify
 $2b \times 3c$ A cuboid has sides length 3cm, 4cm and 5cm.
What is its volume?

What is its surface area?



Calculate the volume

Increase £54 by 17%

Match each of the expressions

$c^{10} \div c^5$

c^{16}

$c^7 \times c^3$

c^5

$(c^8)^2$

c^2

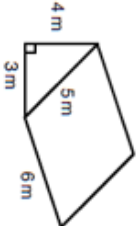
$\frac{c^6}{c^4}$

c^{10}

Name: _____

5-a-day

Foundation

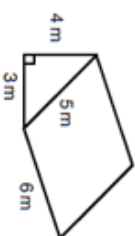
4th May	Corbettmaths
Simplify $6b - 4b$	Simplify $2b \times 3c$
A cuboid has sides length 3cm, 4cm and 5cm. What is its volume?	What is its surface area?
	
Calculate the volume	
Increase £54 by 17%	
Match each of the expressions	



Corbettmaths

Simplify
 $6b - 4b$ Simplify
 $2b \times 3c$ A cuboid has sides length 3cm, 4cm and 5cm.
What is its volume?

What is its surface area?



Calculate the volume

Increase £54 by 17%

Match each of the expressions

$c^{10} \div c^5$

c^{16}

$c^7 \times c^3$

c^5

$(c^8)^2$

c^2

$\frac{c^6}{c^4}$

c^{10}