
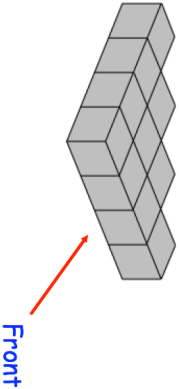
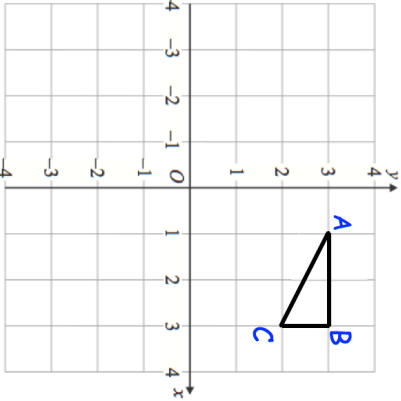
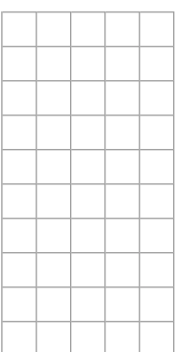
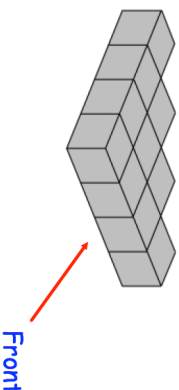
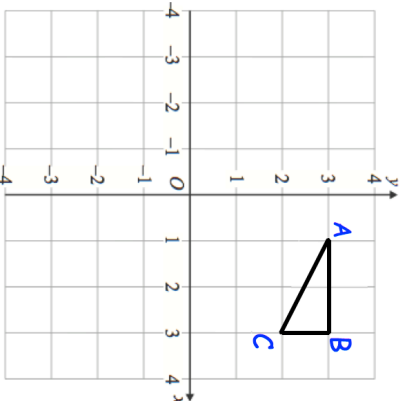


<p>5th May</p>	<p>Foundation</p>
<p>SALE 1/3 OFF ALL ITEMS</p>	<p>Corbettmaths</p>
<p>The original price of a football is £8.16</p>	<p>What is the sale price?</p>
<p>Apples cost a pence each. Bananas cost b pence each.</p> <p>Write down an expression for the total cost, in pencil, of 6 apples and 2 bananas.</p>	<p>Draw the plan view</p> 
	<p>Reflect triangle ABC in the y-axis</p>
	<p>Rotate triangle ABC 90 degrees clockwise about the origin,</p>

<p>5th May</p>	<p>Foundation</p>
<p>SALE 1/3 OFF ALL ITEMS</p>	<p>Corbettmaths</p>
<p>The original price of a football is £8.16</p>	<p>What is the sale price?</p>
<p>Apples cost a pence each. Bananas cost b pence each.</p> <p>Write down an expression for the total cost, in pencil, of 6 apples and 2 bananas.</p>	<p>Draw the plan view</p> 
	<p>Reflect triangle ABC in the y-axis</p>
	<p>Rotate triangle ABC 90 degrees clockwise about the origin,</p>