

Name: \_\_\_\_\_

5-a-day

Foundation



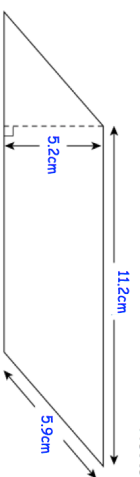
Corbettmaths

6th May

3 paintings cost £186

How much do 5 paintings cost?

--	--



Not to scale

Calculate the area of the parallelogram

Work out

$$100 - 5^2 \times 2$$

--	--

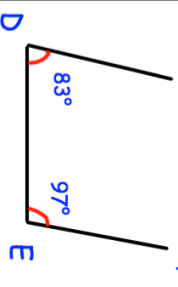
Find the nth term of

9 13 17 21 ...

Find the 50th term.

--	--

C F



Are CD and EF parallel lines?

--	--

Name: \_\_\_\_\_

5-a-day

Foundation



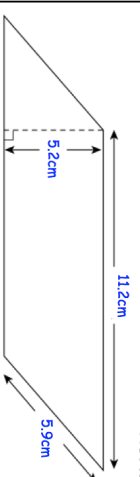
Corbettmaths

6th May

3 paintings cost £186

How much do 5 paintings cost?

--	--



Not to scale

Calculate the area of the parallelogram

Work out

$$100 - 5^2 \times 2$$

--	--

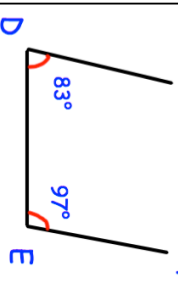
Find the nth term of

9 13 17 21 ...

Find the 50th term.

--	--

C F



Are CD and EF parallel lines?

--	--