

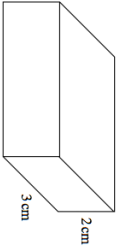



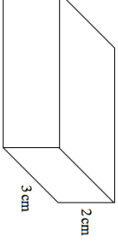



8th May		
Simplify	Simplify	Corbettmaths
$a \times a \times a \times a$	$a + a + a + a$	
2 3 2 1 3 4 5 2 3 3	Calculate the range	
Calculate the mean		
		
Label the probability scale to show: a) The probability of rolling an even number on a dice. Label it with an A b) The probability of rolling a number below 3. Label it with a B		
Expand $5(y + 4)$	Expand $w(w + 8)$	
 		
How many centimetre cubes are needed to fill the box?		

8th May		
Simplify	Simplify	Corbettmaths
$a \times a \times a \times a$	$a + a + a + a$	
2 3 2 1 3 4 5 2 3 3	Calculate the range	
Calculate the mean		
		
Label the probability scale to show: a) The probability of rolling an even number on a dice. Label it with an A b) The probability of rolling a number below 3. Label it with a B		
Expand $5(y + 4)$	Expand $w(w + 8)$	
 		
How many centimetre cubes are needed to fill the box?		