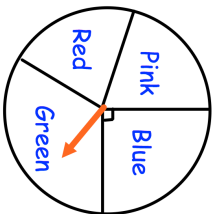
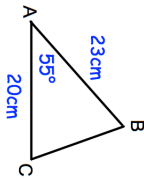
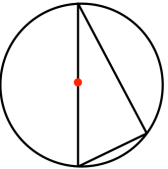
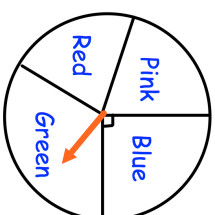
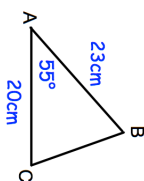
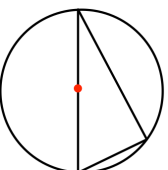


<p>1st May</p> 	<p>Corbettmaths</p> <p>Work out the angle of the green sector</p>
<p>The fair spinner above is spun three times.</p> <p>The probability of getting three greens is $\frac{1}{27}$</p>	<p>The spinner is spun another three times.</p> <p>Work out the probability of obtaining one green and two blues.</p>
	<p>Find the size of angle ABC</p>
<p>Evaluate</p> $25 - \frac{3}{2}$	
	<p>Prove that the angle in a semi-circle is always 90°</p>

<p>1st May</p> 	<p>Corbettmaths</p> <p>Work out the angle of the green sector</p>
<p>The fair spinner above is spun three times.</p> <p>The probability of getting three greens is $\frac{1}{27}$</p>	<p>The spinner is spun another three times.</p> <p>Work out the probability of obtaining one green and two blues.</p>
	<p>Find the size of angle ABC</p>
<p>Evaluate</p> $25 - \frac{3}{2}$	
	<p>Prove that the angle in a semi-circle is always 90°</p>