
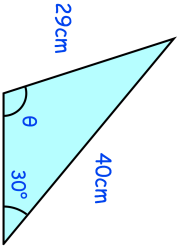
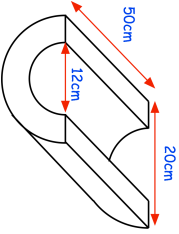

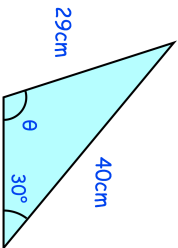
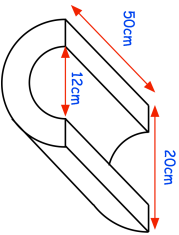


11th May		Corbettmaths 
	Find the two possible values of θ	
Express as a single fraction $4 - \frac{x+5}{x-5} - \frac{x+1}{x+5}$		
In year 7 there are 50% more girls than boys. $\frac{3}{20}$ of the girls are left handed $\frac{1}{8}$ of the boys are left handed	28 of the students in year 7 are left handed. Find how many students are in year 7	
	Calculate the surface area	
The line $y = x + 4$ and the curve $y = x^2 + 3x + 4$ intersect at the points A and B. Find the distance between the points A and B.		

11th May		Corbettmaths 
	Find the two possible values of θ	
Express as a single fraction $4 - \frac{x+5}{x-5} - \frac{x+1}{x+5}$		
In year 7 there are 50% more girls than boys. $\frac{3}{20}$ of the girls are left handed $\frac{1}{8}$ of the boys are left handed	28 of the students in year 7 are left handed. Find how many students are in year 7	
	Calculate the surface area	
The line $y = x + 4$ and the curve $y = x^2 + 3x + 4$ intersect at the points A and B. Find the distance between the points A and B.		