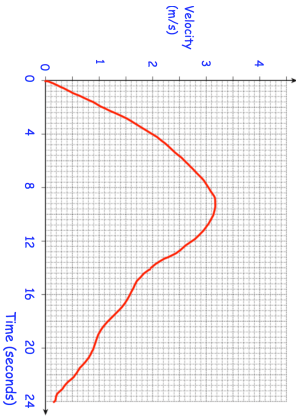
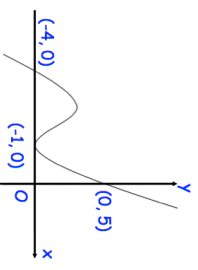
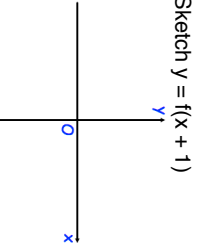
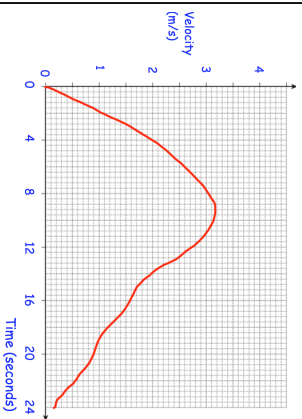
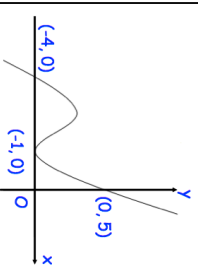
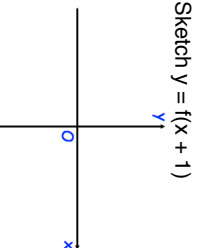


| 16th May | | Corbettmaths | |
|---|---|---|--|
| <p>Here is a velocity-time graph of a particle for 24 seconds</p>  | <p>After how many seconds was the acceleration zero?</p> | | |
| | <p>Work out an estimate of the distance travelled in the first 8 seconds?</p> | | |
| <p>Is your answer to the distance travelled an over-estimate or an under-estimate? Explain your answer</p> | | | |
|  | | <p>Sketch $y = f(x + 1)$</p>  | |
| <p>Solve</p> $2x^2 + 3x - 2 \leq 0$ | | | |

| 16th May | | Corbettmaths | |
|---|---|---|--|
| <p>Here is a velocity-time graph of a particle for 24 seconds</p>  | <p>After how many seconds was the acceleration zero?</p> | | |
| | <p>Work out an estimate of the distance travelled in the first 8 seconds?</p> | | |
| <p>Is your answer to the distance travelled an over-estimate or an under-estimate? Explain your answer</p> | | | |
|  | | <p>Sketch $y = f(x + 1)$</p>  | |
| <p>Solve</p> $2x^2 + 3x - 2 \leq 0$ | | | |