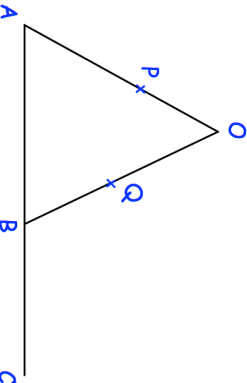
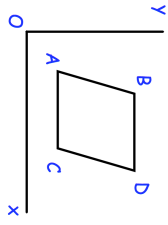

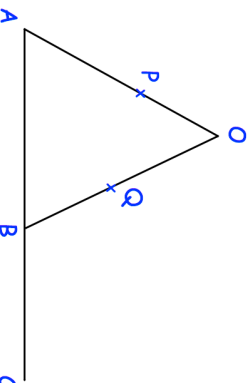
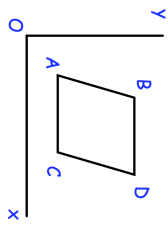


<b>20th May</b> $\sin(x^\circ) = -0.5$	 Corbettmaths
Write down 3 different possible values of $x$	
 <p>AOB is a triangle. P is a point on AO.</p> <p><math>\vec{AB} = 2a</math>      <math>\vec{AO} = 6b</math>      <math>AP:PO = 2:1</math></p>	Find the vector $\vec{OB}$ <p>Q is the midpoint of OB. B is the midpoint of AC. Show PQC is a straight line.</p>
Solve the simultaneous equations $x^2 + y^2 = 1$ $x + 2y = 1$	
	ABCD is a rhombus The coordinates of B are (2, 15) The equation of diagonal AD is $y = \frac{1}{2}x + 4$ Find the equation of diagonal BC

<b>20th May</b> $\sin(x^\circ) = -0.5$	 Corbettmaths
Write down 3 different possible values of $x$	
 <p>AOB is a triangle. P is a point on AO.</p> <p><math>\vec{AB} = 2a</math>      <math>\vec{AO} = 6b</math>      <math>AP:PO = 2:1</math></p>	Find the vector $\vec{OB}$ <p>Q is the midpoint of OB. B is the midpoint of AC. Show PQC is a straight line.</p>
Solve the simultaneous equations $x^2 + y^2 = 1$ $x + 2y = 1$	
	ABCD is a rhombus The coordinates of B are (2, 15) The equation of diagonal AD is $y = \frac{1}{2}x + 4$ Find the equation of diagonal BC