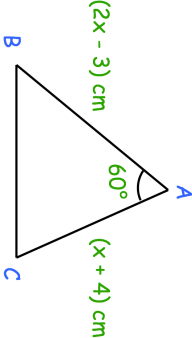
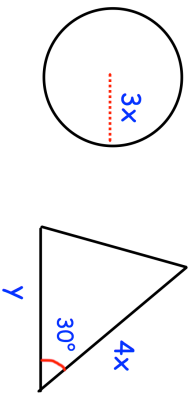
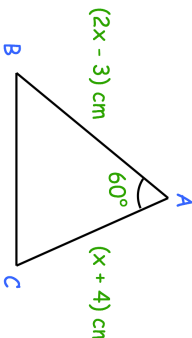
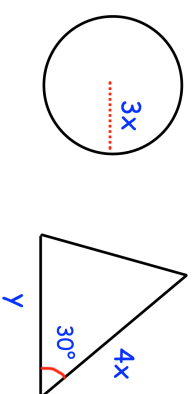


29th May		Corbettmaths										
The curve $y = a^x$ crosses the y-axis at the point A												
Write down the coordinates of A												
		The area of the triangle is $15\sqrt{3}$ cm <sup>2</sup> Find x to 3 significant figures										
<table border="1"> <thead> <tr> <th>Amount spent, m, (£)</th> <th>Frequency</th> </tr> </thead> <tbody> <tr> <td><math>0 &lt; m \leq 5</math></td> <td>4</td> </tr> <tr> <td><math>5 &lt; m \leq 10</math></td> <td>12</td> </tr> <tr> <td><math>10 &lt; m \leq 15</math></td> <td>26</td> </tr> <tr> <td><math>15 &lt; m \leq 20</math></td> <td>8</td> </tr> </tbody> </table>		Amount spent, m, (£)	Frequency	$0 < m \leq 5$	4	$5 < m \leq 10$	12	$10 < m \leq 15$	26	$15 < m \leq 20$	8	Find an estimate of the median
Amount spent, m, (£)	Frequency											
$0 < m \leq 5$	4											
$5 < m \leq 10$	12											
$10 < m \leq 15$	26											
$15 < m \leq 20$	8											
Given $f(x) = \frac{8x - 1}{5}$ find $f^{-1}(x)$												
		The areas of the circle and triangle are equal. Express y in terms of x.										

29th May		Corbettmaths										
The curve $y = a^x$ crosses the y-axis at the point A												
Write down the coordinates of A												
		The area of the triangle is $15\sqrt{3}$ cm <sup>2</sup> Find x to 3 significant figures										
<table border="1"> <thead> <tr> <th>Amount spent, m, (£)</th> <th>Frequency</th> </tr> </thead> <tbody> <tr> <td><math>0 &lt; m \leq 5</math></td> <td>4</td> </tr> <tr> <td><math>5 &lt; m \leq 10</math></td> <td>12</td> </tr> <tr> <td><math>10 &lt; m \leq 15</math></td> <td>26</td> </tr> <tr> <td><math>15 &lt; m \leq 20</math></td> <td>8</td> </tr> </tbody> </table>		Amount spent, m, (£)	Frequency	$0 < m \leq 5$	4	$5 < m \leq 10$	12	$10 < m \leq 15$	26	$15 < m \leq 20$	8	Find an estimate of the median
Amount spent, m, (£)	Frequency											
$0 < m \leq 5$	4											
$5 < m \leq 10$	12											
$10 < m \leq 15$	26											
$15 < m \leq 20$	8											
Given $f(x) = \frac{8x - 1}{5}$ find $f^{-1}(x)$												
		The areas of the circle and triangle are equal. Express y in terms of x.										