
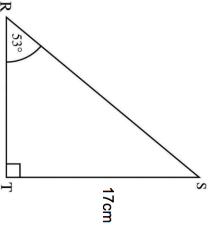
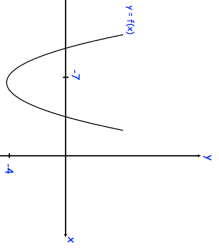
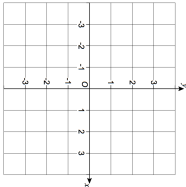


Name: _____

5-a-day


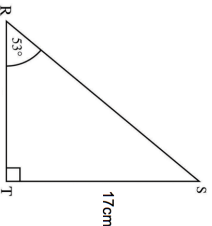
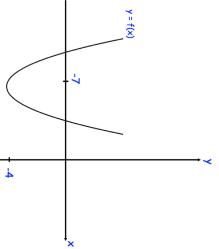
Higher Plus

30th May	A = {2, 3, 4, 5, 7} B = {2, 3, 5, 9} Find P(A ∩ B)	 Corbettmaths	
<p>Angle SRT is 53°, to the nearest degree. ST is 17cm to the nearest centimetre.</p> <p>Work out the upper bound for the length of RS.</p>		<p>$y = f(x)$ has a minimum point at (-7, -4).</p> <p>The graph of $y = f(x) + a$ has a minimum point at (-7, 0), where a is a constant.</p> <p>Write down the value of a.</p>	
<p>Make y the subject of</p> $\frac{8}{x} = \frac{3}{y} + \frac{2}{5}$		<p>Sketch $x^2 + y^2 = 9$</p>	

Name: _____

5-a-day

Higher Plus

30th May	A = {2, 3, 4, 5, 7} B = {2, 3, 5, 9} Find P(A ∩ B)	 Corbettmaths	
<p>Angle SRT is 53°, to the nearest degree. ST is 17cm to the nearest centimetre.</p> <p>Work out the upper bound for the length of RS.</p>		<p>$y = f(x)$ has a minimum point at (-7, -4).</p> <p>The graph of $y = f(x) + a$ has a minimum point at (-7, 0), where a is a constant.</p> <p>Write down the value of a.</p>	
<p>Make y the subject of</p> $\frac{8}{x} = \frac{3}{y} + \frac{2}{5}$		<p>Sketch $x^2 + y^2 = 9$</p>	