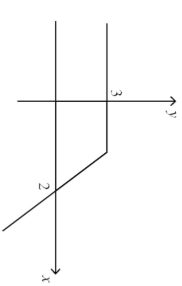
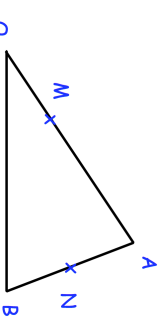
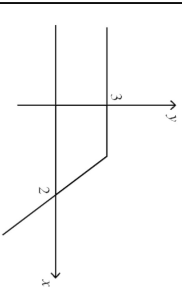


4th May	The curve with equation	Corbettmaths
$y = x^2 - 2x - 24$ is reflected in the x-axis	Write the equation of the reflected curve	Shown is $y = f(x)$
	Sketch $y = f(-x)$	Sketch $y = -f(x)$
<b>Given</b> $f(x) = 5x - 3$ $g(x) = 2x + 1$	<b>Find</b> $fg(-1)$	$\vec{OA} = 4a$ $\vec{OB} = 5b$ OM:MA = 1:3 and N is the midpoint of AB <b>Find</b>
		

4th May	The curve with equation	Corbettmaths
$y = x^2 - 2x - 24$ is reflected in the x-axis	Write the equation of the reflected curve	Shown is $y = f(x)$
	Sketch $y = f(-x)$	Sketch $y = -f(x)$
<b>Given</b> $f(x) = 5x - 3$ $g(x) = 2x + 1$	<b>Find</b> $fg(-1)$	$\vec{OA} = 4a$ $\vec{OB} = 5b$ OM:MA = 1:3 and N is the midpoint of AB <b>Find</b>
