
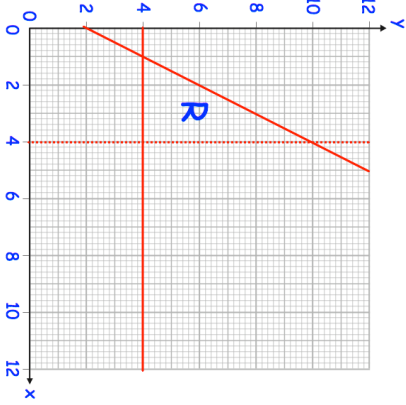
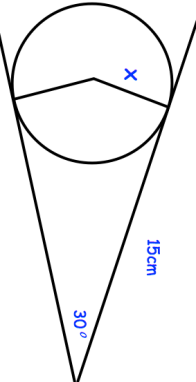

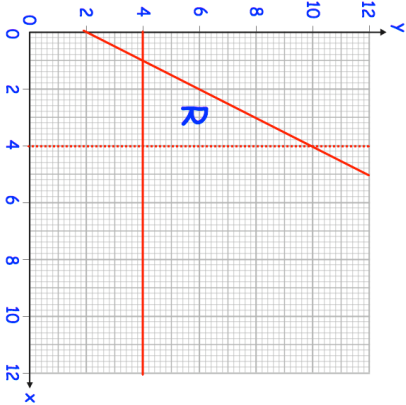
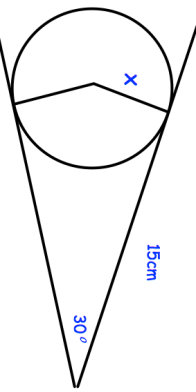


<b>13th May</b>	 Corbettmaths
Neil chooses a password for his email account. His password has 4 letters (lowercase) and then 3 digits (0 - 9) How many different possible passwords can he choose?	
	The region labelled R satisfies three inequalities. State the three inequalities
	Calculate x  Work out the probability that Patrick chooses two counters that are different colours.
There are 11 counters in a bag. 4 counters are white and the rest are red. Patrick chooses a counter at random, notes its colour, then replaces it. He then chooses a second counter at random.	

<b>13th May</b>	 Corbettmaths
Neil chooses a password for his email account. His password has 4 letters (lowercase) and then 3 digits (0 - 9) How many different possible passwords can he choose?	
	The region labelled R satisfies three inequalities. State the three inequalities
	Calculate x  Work out the probability that Patrick chooses two counters that are different colours.
There are 11 counters in a bag. 4 counters are white and the rest are red. Patrick chooses a counter at random, notes its colour, then replaces it. He then chooses a second counter at random.	