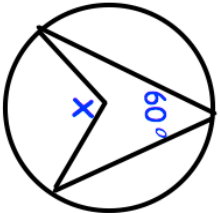
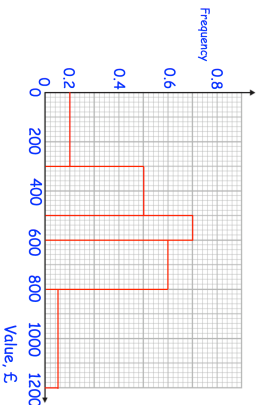
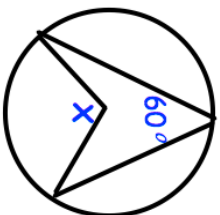
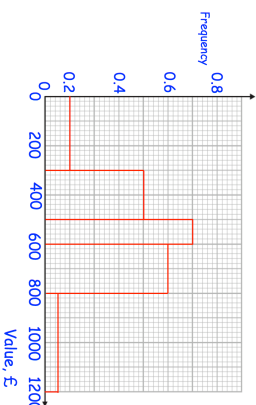


16th May	Calculate angle x												
 <p>The points ABCD are in a straight line. AB : BC : BD = 1:2:5 The point B is (2, 17.5) and D is (27, 5)</p> <p>Simplify <math display="block">\frac{x^2 - 1}{x^2 + 4x + 3}</math></p> <p>Christine has drawn a histogram to show the value of some antiques. She has made some mistakes.</p> <table border="1"> <thead> <tr> <th>Value, v pounds</th> <th>Frequency</th> </tr> </thead> <tbody> <tr> <td><math>0 \leq v &lt; 300</math></td> <td>60</td> </tr> <tr> <td><math>300 \leq v &lt; 500</math></td> <td>100</td> </tr> <tr> <td><math>500 \leq v &lt; 600</math></td> <td>70</td> </tr> <tr> <td><math>600 \leq v &lt; 800</math></td> <td>60</td> </tr> <tr> <td><math>800 \leq v &lt; 1200</math></td> <td>40</td> </tr> </tbody> </table>	Value, v pounds	Frequency	$0 \leq v < 300$	60	$300 \leq v < 500$	100	$500 \leq v < 600$	70	$600 \leq v < 800$	60	$800 \leq v < 1200$	40	<p>Find the coordinates of point A</p> 
Value, v pounds	Frequency												
$0 \leq v < 300$	60												
$300 \leq v < 500$	100												
$500 \leq v < 600$	70												
$600 \leq v < 800$	60												
$800 \leq v < 1200$	40												

16th May	Calculate angle x												
 <p>The points ABCD are in a straight line. AB : BC : BD = 1:2:5 The point B is (2, 17.5) and D is (27, 5)</p> <p>Simplify <math display="block">\frac{x^2 - 1}{x^2 + 4x + 3}</math></p> <p>Christine has drawn a histogram to show the value of some antiques. She has made some mistakes.</p> <table border="1"> <thead> <tr> <th>Value, v pounds</th> <th>Frequency</th> </tr> </thead> <tbody> <tr> <td><math>0 \leq v &lt; 300</math></td> <td>60</td> </tr> <tr> <td><math>300 \leq v &lt; 500</math></td> <td>100</td> </tr> <tr> <td><math>500 \leq v &lt; 600</math></td> <td>70</td> </tr> <tr> <td><math>600 \leq v &lt; 800</math></td> <td>60</td> </tr> <tr> <td><math>800 \leq v &lt; 1200</math></td> <td>40</td> </tr> </tbody> </table>	Value, v pounds	Frequency	$0 \leq v < 300$	60	$300 \leq v < 500$	100	$500 \leq v < 600$	70	$600 \leq v < 800$	60	$800 \leq v < 1200$	40	<p>Find the coordinates of point A</p> 
Value, v pounds	Frequency												
$0 \leq v < 300$	60												
$300 \leq v < 500$	100												
$500 \leq v < 600$	70												
$600 \leq v < 800$	60												
$800 \leq v < 1200$	40												