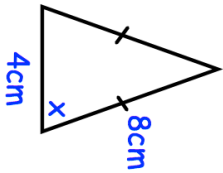
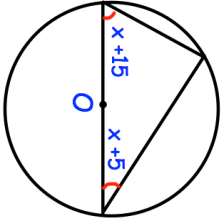
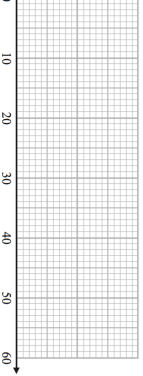
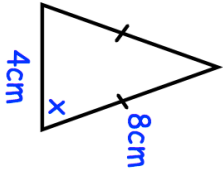
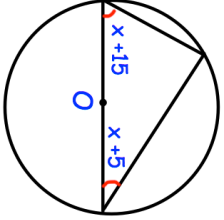
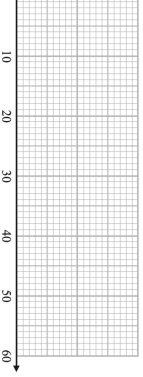


19th May		Corbettmaths	
	Find x		
<p>A rectangular rugby pitch has width 74 metres, measured to the nearest metre.</p> <p>Write down the upper bound of the width of the pitch.</p>			
<p>The length of the pitch is 115 metres, measured to the nearest 5 metres.</p> <p>Work out the upper bound for the perimeter of the pitch</p>			
	Find x		
	<p>A puzzle is completed by 120 students. The quickest time was 8 seconds. 90 of the students took less than 40 seconds.</p> <p>The median and interquartile range are equal.</p> <p>The range is double the interquartile range. Draw a possible box plot for this information</p>		

19th May		Corbettmaths	
	Find x		
<p>A rectangular rugby pitch has width 74 metres, measured to the nearest metre.</p> <p>Write down the upper bound of the width of the pitch.</p>			
<p>The length of the pitch is 115 metres, measured to the nearest 5 metres.</p> <p>Work out the upper bound for the perimeter of the pitch</p>			
	Find x		
	<p>A puzzle is completed by 120 students. The quickest time was 8 seconds. 90 of the students took less than 40 seconds.</p> <p>The median and interquartile range are equal.</p> <p>The range is double the interquartile range. Draw a possible box plot for this information</p>		